
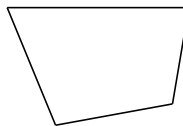


# Classifying Quadrilaterals (A)

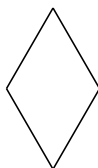
Identify each quadrilateral.



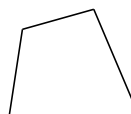
\_\_\_\_\_



\_\_\_\_\_



\_\_\_\_\_



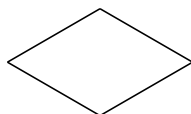
\_\_\_\_\_



\_\_\_\_\_



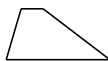
\_\_\_\_\_




\_\_\_\_\_



\_\_\_\_\_




\_\_\_\_\_



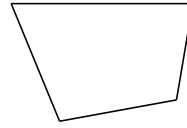
\_\_\_\_\_

# Classifying Quadrilaterals (A) Answers

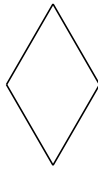
Identify each quadrilateral.



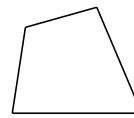
parallelogram



quadrilateral



rhombus



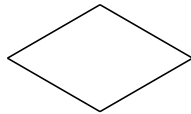
quadrilateral



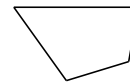
square



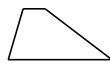
square



rhombus



quadrilateral



trapezoid



rectangle