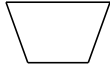


# Classifying Quadrilaterals (C)

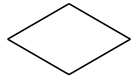
Identify each quadrilateral.



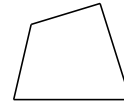
\_\_\_\_\_



\_\_\_\_\_



\_\_\_\_\_



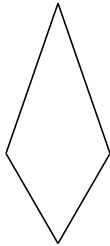
\_\_\_\_\_



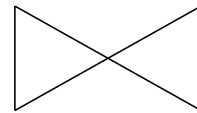
\_\_\_\_\_



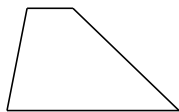
\_\_\_\_\_



\_\_\_\_\_



\_\_\_\_\_



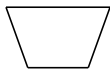
\_\_\_\_\_



\_\_\_\_\_

# Classifying Quadrilaterals (C) Answers

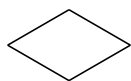
Identify each quadrilateral.



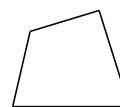
isosceles trapezoid



right-angled trapezoid




rhombus



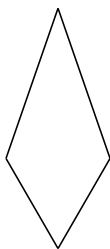
quadrilateral



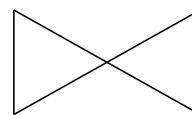
dart



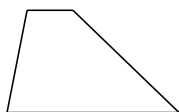
parallelogram



kite



bowtie



trapezoid



rhombus