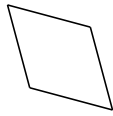



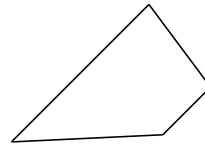
Classifying Quadrilaterals (J)

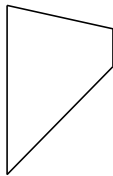
Identify each quadrilateral.

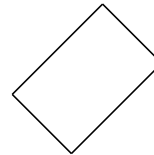


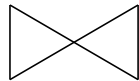


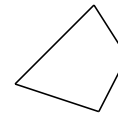










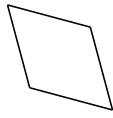






Classifying Quadrilaterals (J) Answers

Identify each quadrilateral.



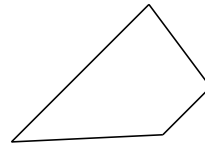
rhombus



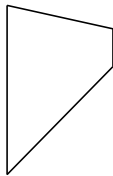
square



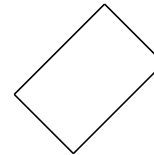
kite



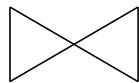
trapezoid



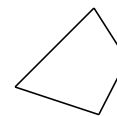
trapezoid



rectangle




bowtie



quadrilateral



dart



parallelogram