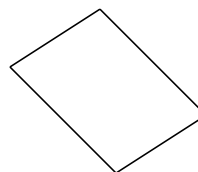
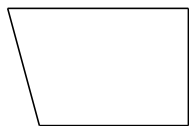


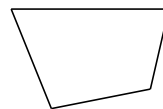
Classifying Quadrilaterals (I)

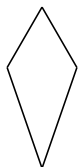
Identify each quadrilateral.

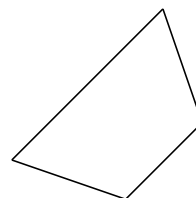


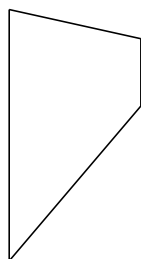







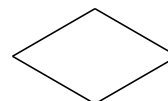










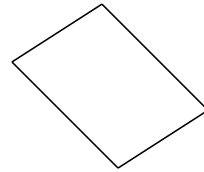


Classifying Quadrilaterals (I) Answers

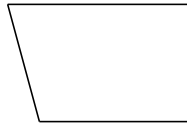
Identify each quadrilateral.



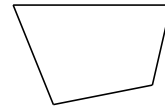
rectangle



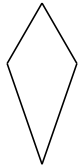
parallelogram



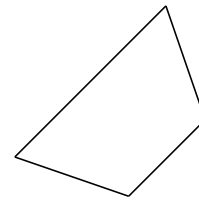
right-angled trapezoid



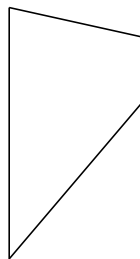
quadrilateral



kite



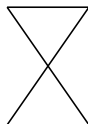
isosceles trapezoid



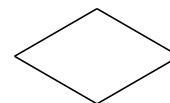
trapezoid



right-angled trapezoid



bowtie



rhombus