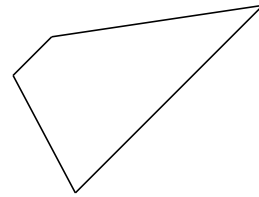


# Classifying Quadrilaterals (B)

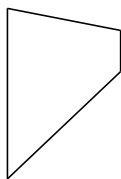
Identify each quadrilateral.



\_\_\_\_\_



\_\_\_\_\_



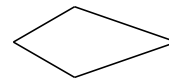
\_\_\_\_\_



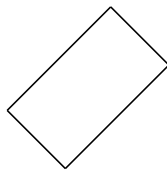
\_\_\_\_\_



\_\_\_\_\_



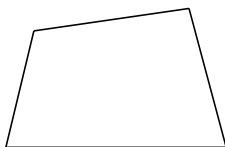
\_\_\_\_\_



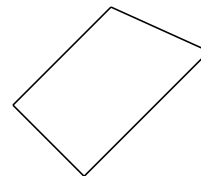
\_\_\_\_\_



\_\_\_\_\_



\_\_\_\_\_



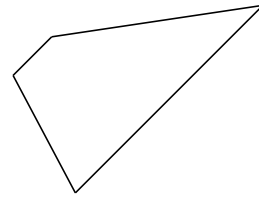
\_\_\_\_\_

# Classifying Quadrilaterals (B) Answers

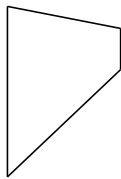
Identify each quadrilateral.



rhombus



trapezoid



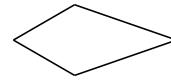
trapezoid



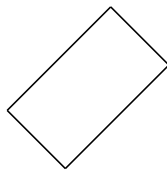
dart



isosceles trapezoid



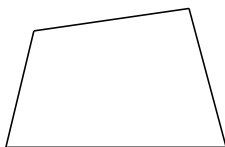
kite



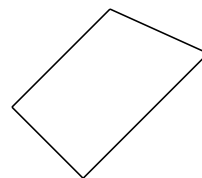
rectangle



square



quadrilateral



right-angled trapezoid