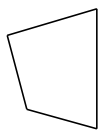
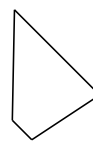


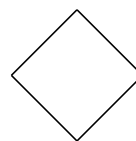
Classifying Quadrilaterals (A)

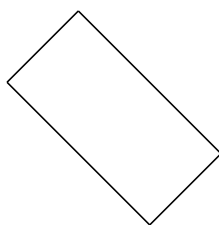
Identify each quadrilateral.

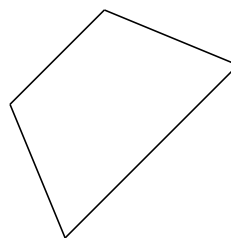




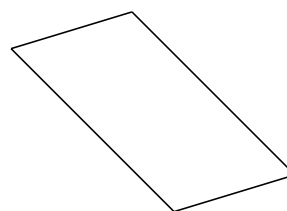


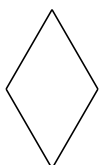


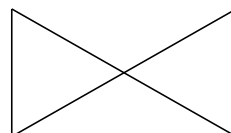






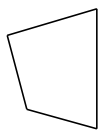




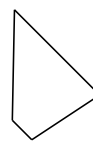


Classifying Quadrilaterals (A) Answers


Identify each quadrilateral.



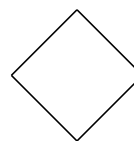
quadrilateral



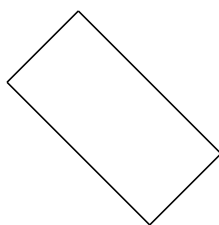
trapezoid



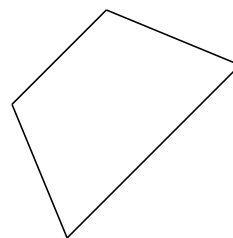
right-angled trapezoid



square



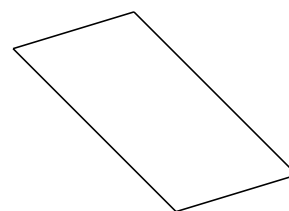
rectangle



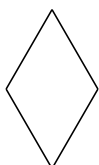
isosceles trapezoid



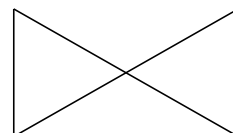
parallelogram



parallelogram



rhombus



bowtie