

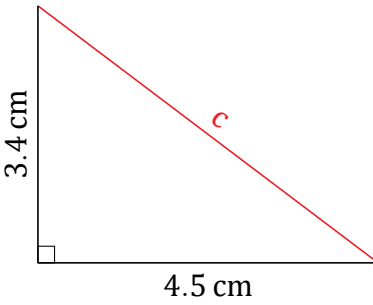
# Pythagorean Theorem (A)

Name: \_\_\_\_\_

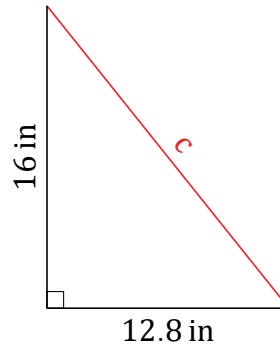
Date: \_\_\_\_\_

Calculate the missing side measurement using  $a^2 + b^2 = c^2$ .

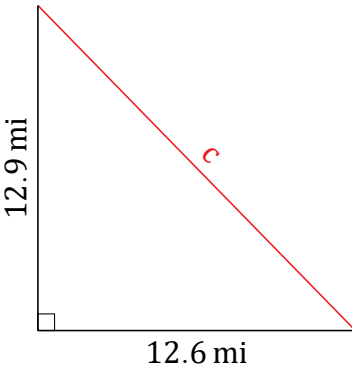
1.



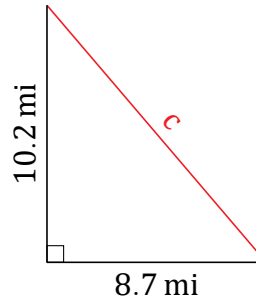
2.



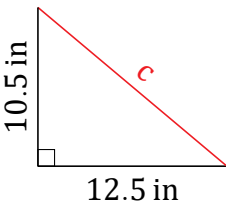
3.



4.



5.



6.

