

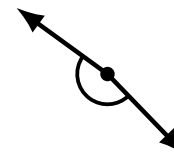
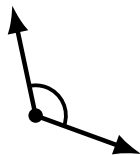
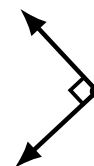
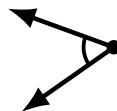


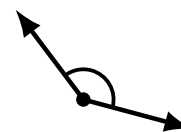

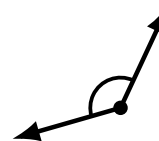
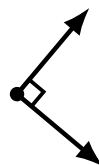
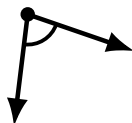
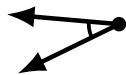

Identifying Angle Types (I)

Name: _____

Date: _____

Score: _____

Identify each angle as acute, obtuse or right.



Identifying Angle Types (I) Answers

Name: _____

Date: _____

Score: _____

Identify each angle as acute, obtuse or right.



acute



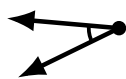
obtuse



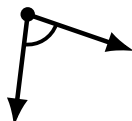
obtuse



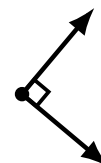
acute



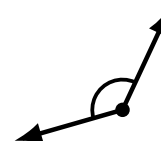
acute



acute




right



obtuse



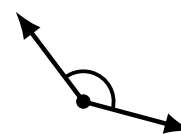
acute




acute



obtuse



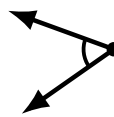
obtuse



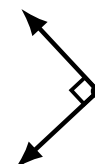
obtuse



acute



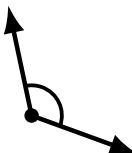
acute



right



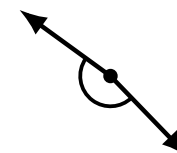
obtuse



obtuse



acute



obtuse