

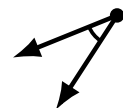
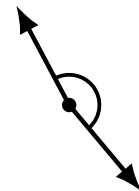
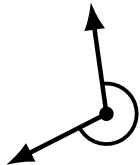
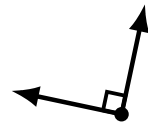
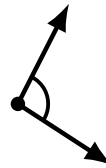
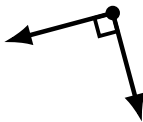
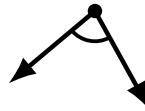

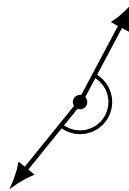
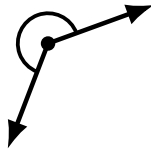
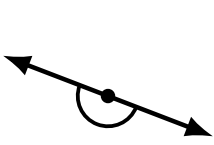
Identifying Angle Types (H)

Name: _____

Date: _____

Score: _____

Identify each angle as acute, obtuse, right, straight or reflex.



Identifying Angle Types (H) Answers

Name: _____

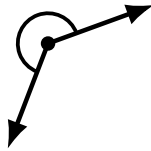
Date: _____

Score: _____

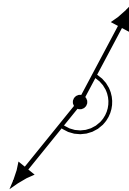
Identify each angle as acute, obtuse, right, straight or reflex.



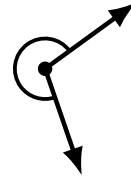
straight



reflex



reflex



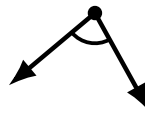
reflex



acute




obtuse



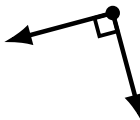
acute



reflex



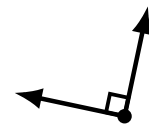
acute



right



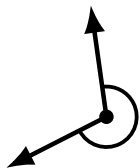
obtuse



right



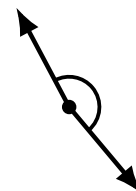
obtuse



reflex



acute



obtuse



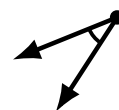
obtuse



straight



obtuse



acute