

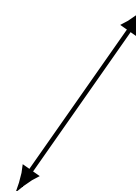

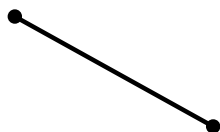

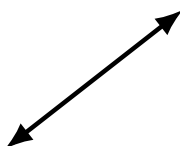
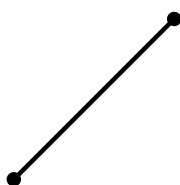
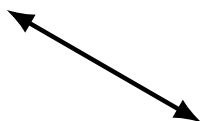
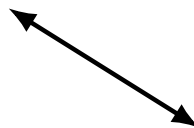

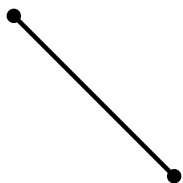
Lines, Line Segments and Rays (A)

Name: _____

Date: _____

Score: _____

Identify each diagram as representing a line, line segment or a ray.



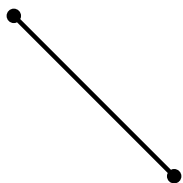
Lines, Line Segments and Rays (A) Answers

Name: _____


Date: _____

Score: _____

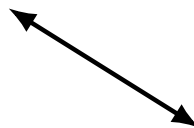
Identify each diagram as representing a line, line segment or a ray.



line segment



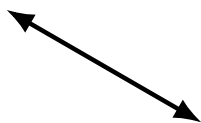
ray



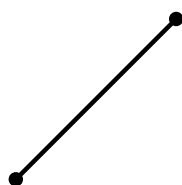
line



line segment



line



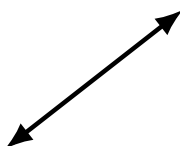
line segment



line segment




line



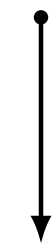
line



line segment



ray



ray




line



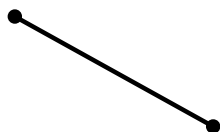
line



ray




ray



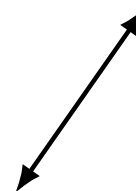
line segment



ray



ray



line

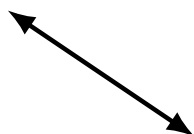
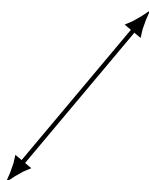



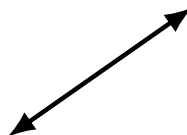
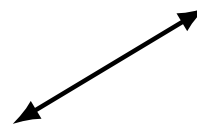
Lines, Line Segments and Rays (B)

Name: _____

Date: _____

Score: _____

Identify each diagram as representing a line, line segment or a ray.



Lines, Line Segments and Rays (B) Answers

Name: _____

Date: _____

Score: _____

Identify each diagram as representing a line, line segment or a ray.



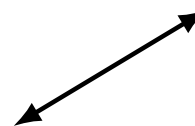
ray



ray



line



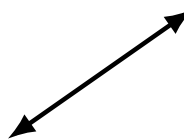
line



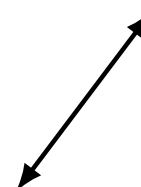
line segment



ray



line




line



line segment



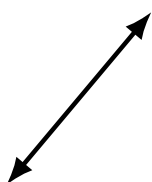
ray



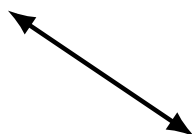
line segment



line



line



line



ray



line segment



line segment



line segment



ray



line segment


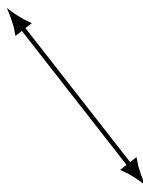


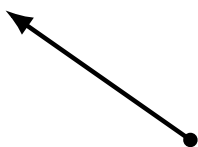


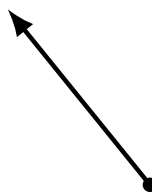


Lines, Line Segments and Rays (C)

Name: _____

Date: _____

Score: _____

Identify each diagram as representing a line, line segment or a ray.



Lines, Line Segments and Rays (C) Answers

Name: _____

Date: _____

Score: _____

Identify each diagram as representing a line, line segment or a ray.




line




line segment



ray



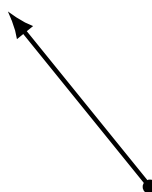
ray



line segment



line segment



ray



ray




line



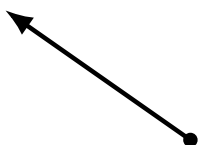
ray




line




line segment



ray




ray



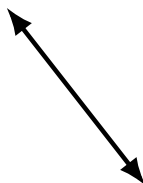
line segment



line segment




line segment



line



line



line




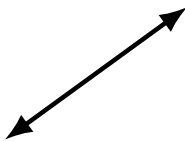
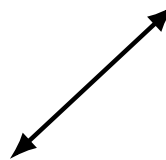

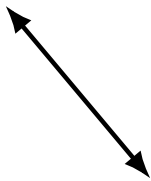


Lines, Line Segments and Rays (D)

Name: _____

Date: _____

Score: _____

Identify each diagram as representing a line, line segment or a ray.




Lines, Line Segments and Rays (D) Answers

Name: _____

Date: _____

Score: _____

Identify each diagram as representing a line, line segment or a ray.




line segment



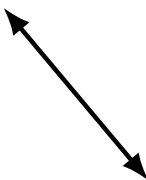
line segment



line segment



ray



line



ray




line



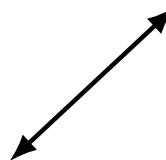
ray



line



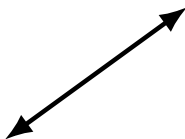
line segment



line



line




line




line



ray




ray




line segment



line segment



ray



line segment




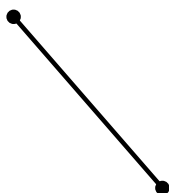
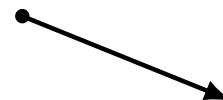
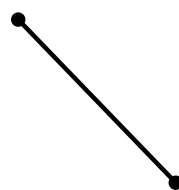
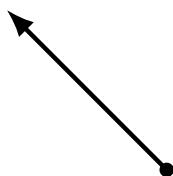

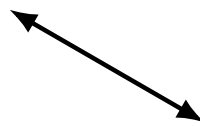
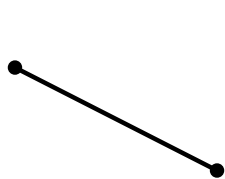
Lines, Line Segments and Rays (E)

Name: _____

Date: _____

Score: _____

Identify each diagram as representing a line, line segment or a ray.



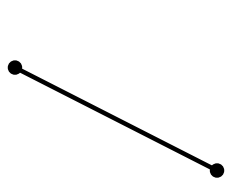
Lines, Line Segments and Rays (E) Answers

Name: _____

Date: _____

Score: _____

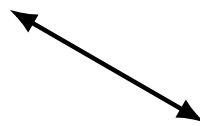
Identify each diagram as representing a line, line segment or a ray.




line segment



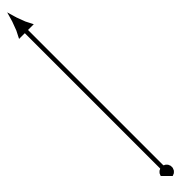
ray



line



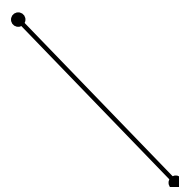
line segment



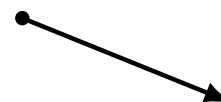
ray



line



line segment




ray



ray



ray




line



line segment




line



line segment



line




line




ray



line segment



line



line segment

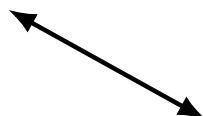



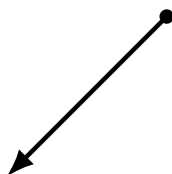
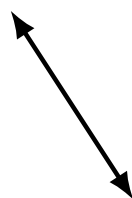
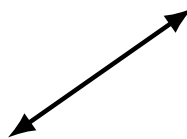
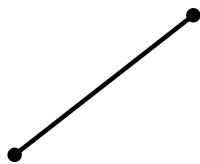
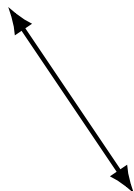
Lines, Line Segments and Rays (F)

Name: _____

Date: _____

Score: _____

Identify each diagram as representing a line, line segment or a ray.



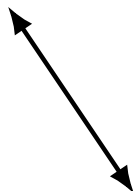
Lines, Line Segments and Rays (F) Answers

Name: _____

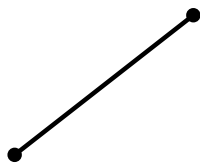
Date: _____

Score: _____

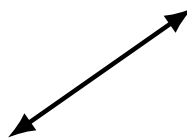
Identify each diagram as representing a line, line segment or a ray.



line



line segment



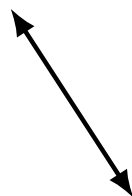
line



line



ray



line



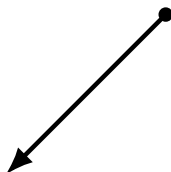
ray



line segment




line segment




ray



ray



line segment



line segment




line



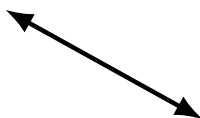
line segment



ray



line



line



ray



ray



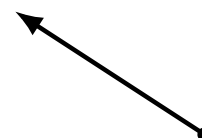

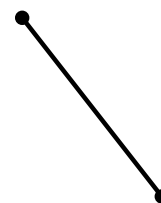

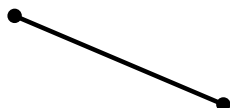
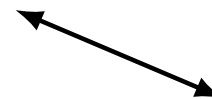
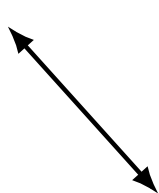
Lines, Line Segments and Rays (G)

Name: _____

Date: _____

Score: _____

Identify each diagram as representing a line, line segment or a ray.



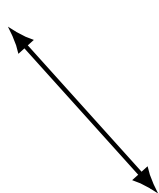
Lines, Line Segments and Rays (G) Answers

Name: _____

Date: _____

Score: _____

Identify each diagram as representing a line, line segment or a ray.



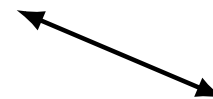
line



ray



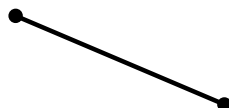
line




line



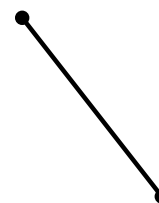
line



line segment




line segment



line segment



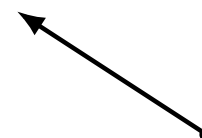
line segment



line



ray



ray



ray




ray



line segment




line



ray



line



line segment



line segment

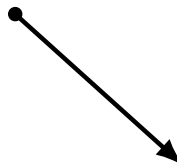


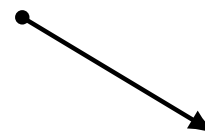
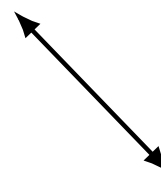
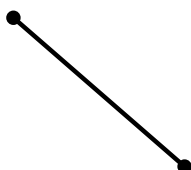


Lines, Line Segments and Rays (H)

Name: _____

Date: _____

Score: _____

Identify each diagram as representing a line, line segment or a ray.




Lines, Line Segments and Rays (H) Answers

Name: _____

Date: _____

Score: _____


Identify each diagram as representing a line, line segment or a ray.



line segment




line segment



line segment



ray



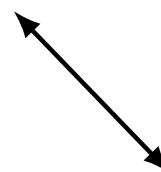
line segment



ray



ray



line



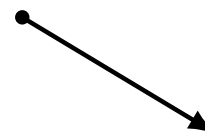
ray



line segment



ray



ray




line



line




line segment



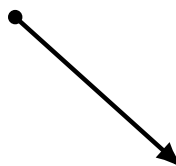
line



line segment



line



ray



line



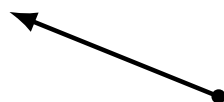
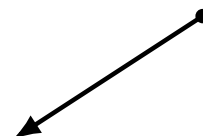


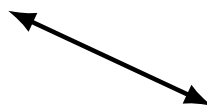
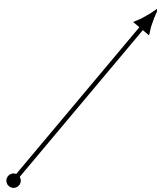

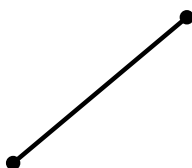
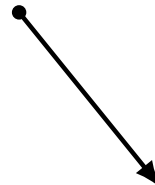
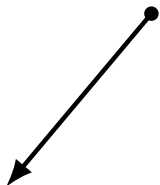
Lines, Line Segments and Rays (I)

Name: _____

Date: _____

Score: _____

Identify each diagram as representing a line, line segment or a ray.



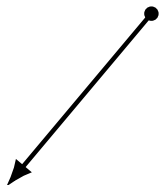
Lines, Line Segments and Rays (I) Answers

Name: _____

Date: _____

Score: _____

Identify each diagram as representing a line, line segment or a ray.



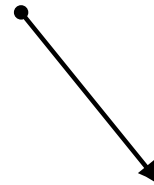
ray



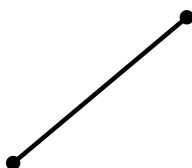
line



line




ray



line segment



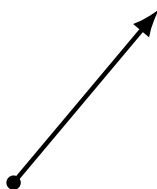
ray



line



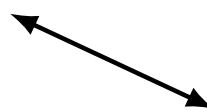
line segment



ray



line segment




line




line segment



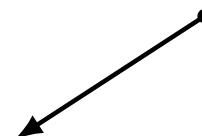
line



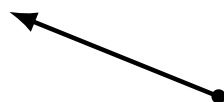
ray



line segment




ray




ray



line segment



line segment



line



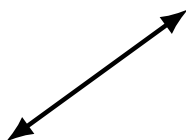
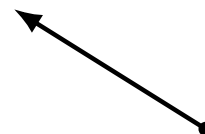



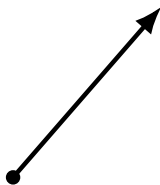
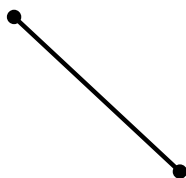

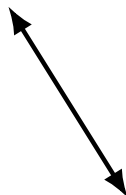
Lines, Line Segments and Rays (J)

Name: _____

Date: _____

Score: _____

Identify each diagram as representing a line, line segment or a ray.



Lines, Line Segments and Rays (J) Answers

Name: _____

Date: _____

Score: _____

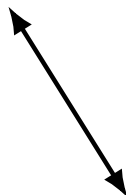
Identify each diagram as representing a line, line segment or a ray.



ray



line segment




line



line segment



line




ray



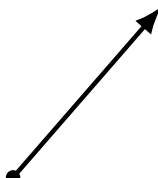
ray



line




line segment




ray




line segment



ray



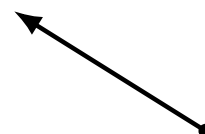
line segment



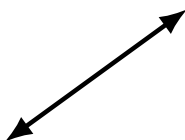
line



line segment




ray




line



line



line



line segment