

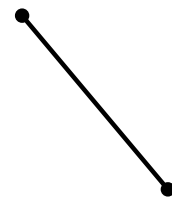

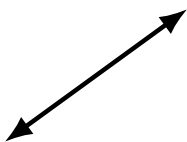
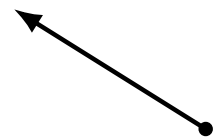
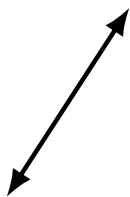

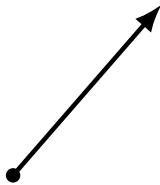


# Lines, Line Segments and Rays (J)

Name: \_\_\_\_\_

Date: \_\_\_\_\_

Score: \_\_\_\_\_

Identify each diagram as representing a line, line segment or a ray.



# Lines, Line Segments and Rays (J) Answers

Name: \_\_\_\_\_

Date: \_\_\_\_\_

Score: \_\_\_\_\_


Identify each diagram as representing a line, line segment or a ray.



ray



line segment




line



line segment



line



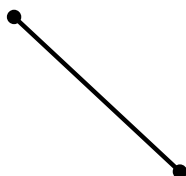
ray



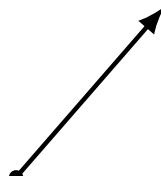
ray



line




line segment




ray




line segment



ray



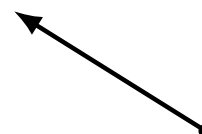
line segment



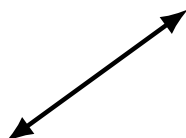
line



line segment



ray




line



line



line



line segment