



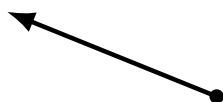
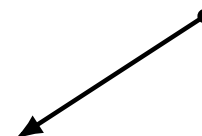


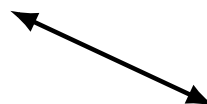


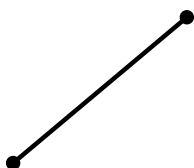
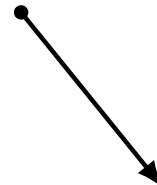
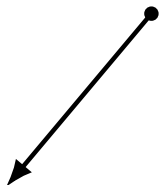
Lines, Line Segments and Rays (I)

Name: _____

Date: _____

Score: _____

Identify each diagram as representing a line, line segment or a ray.



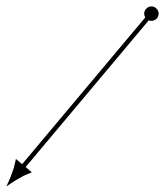
Lines, Line Segments and Rays (I) Answers

Name: _____

Date: _____

Score: _____

Identify each diagram as representing a line, line segment or a ray.



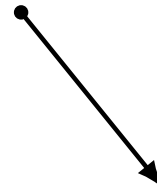
ray



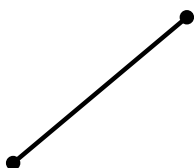
line



line




ray



line segment



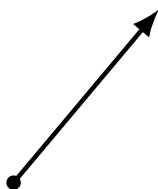
ray



line



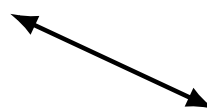
line segment



ray



line segment




line




line segment



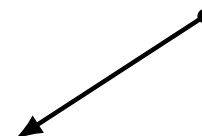
line



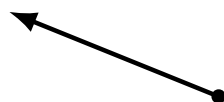
ray



line segment




ray




ray



line segment



line segment



line