

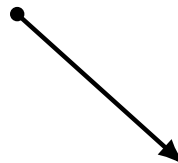
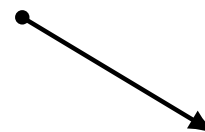
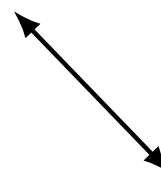
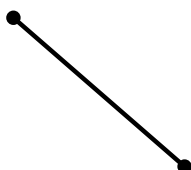


Lines, Line Segments and Rays (H)

Name: _____

Date: _____

Score: _____

Identify each diagram as representing a line, line segment or a ray.




Lines, Line Segments and Rays (H) Answers

Name: _____

Date: _____

Score: _____


Identify each diagram as representing a line, line segment or a ray.



line segment



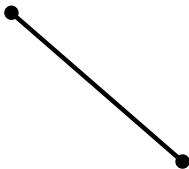
line segment



line segment



ray



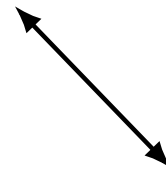
line segment



ray



ray



line



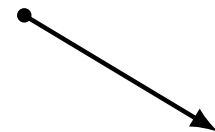
ray



line segment



ray



ray



line



line




line segment



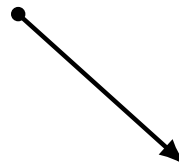
line



line segment



line



ray



line