


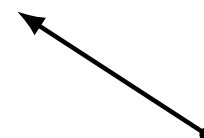

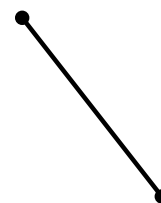

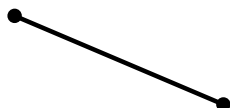
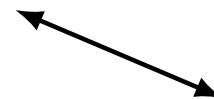
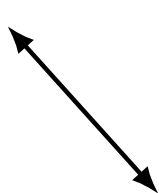
Lines, Line Segments and Rays (G)

Name: _____

Date: _____

Score: _____

Identify each diagram as representing a line, line segment or a ray.



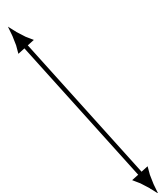
Lines, Line Segments and Rays (G) Answers

Name: _____

Date: _____

Score: _____

Identify each diagram as representing a line, line segment or a ray.



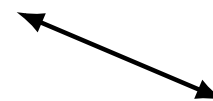
line



ray



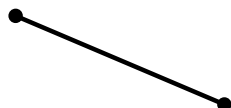
line




line



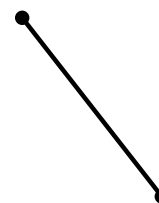
line



line segment




line segment



line segment



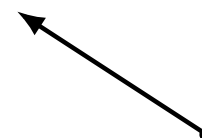
line segment



line



ray



ray



ray




ray



line segment




line



ray



line



line segment



line segment