

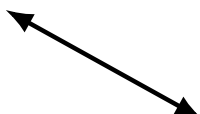



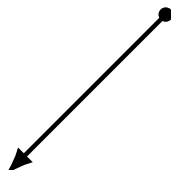
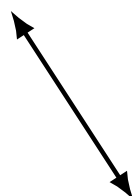
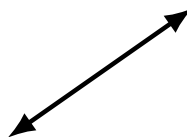
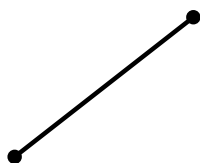
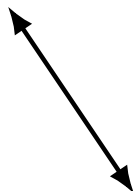
Lines, Line Segments and Rays (F)

Name: _____

Date: _____

Score: _____

Identify each diagram as representing a line, line segment or a ray.



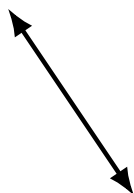
Lines, Line Segments and Rays (F) Answers

Name: _____

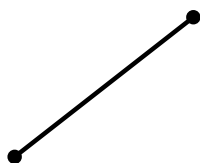
Date: _____

Score: _____

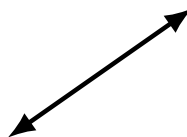
Identify each diagram as representing a line, line segment or a ray.



line



line segment



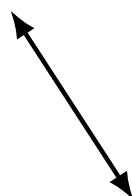
line



line



ray



line



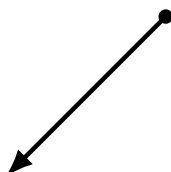
ray



line segment




line segment



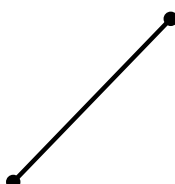
ray



ray



line segment



line segment




line



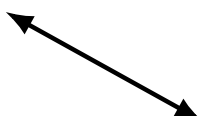
line segment



ray



line



line



ray



ray