





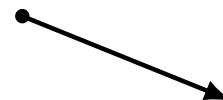

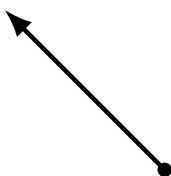

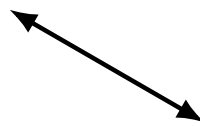
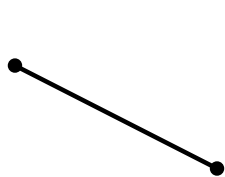
Lines, Line Segments and Rays (E)

Name: _____

Date: _____

Score: _____

Identify each diagram as representing a line, line segment or a ray.



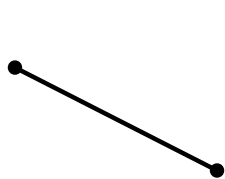
Lines, Line Segments and Rays (E) Answers

Name: _____

Date: _____

Score: _____

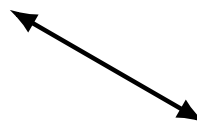
Identify each diagram as representing a line, line segment or a ray.




line segment



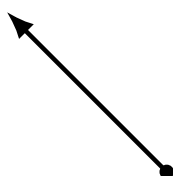
ray



line




line segment



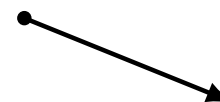
ray



line



line segment




ray



ray



ray




line



line segment




line



line segment



line




line




ray



line segment



line



line segment