

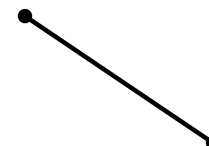


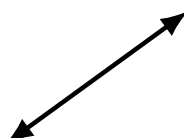
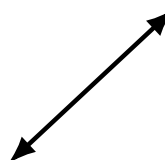

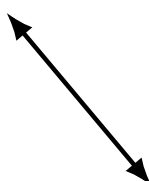


Lines, Line Segments and Rays (D)

Name: _____

Date: _____

Score: _____

Identify each diagram as representing a line, line segment or a ray.




Lines, Line Segments and Rays (D) Answers

Name: _____

Date: _____

Score: _____

Identify each diagram as representing a line, line segment or a ray.




line segment



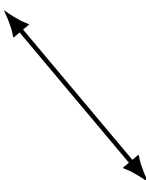
line segment



line segment



ray



line



ray




line



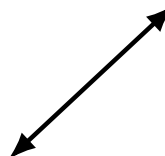
ray



line



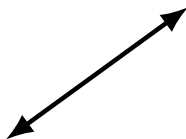
line segment



line



line



line




line



ray



ray



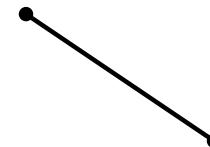
line segment



line segment



ray



line segment