


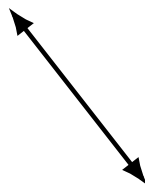


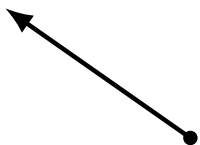

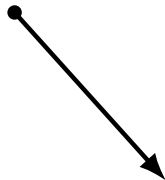
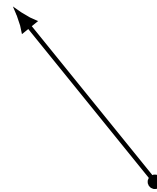



Lines, Line Segments and Rays (C)

Name: _____

Date: _____

Score: _____

Identify each diagram as representing a line, line segment or a ray.



Lines, Line Segments and Rays (C) Answers

Name: _____

Date: _____

Score: _____

Identify each diagram as representing a line, line segment or a ray.




line




line segment



ray



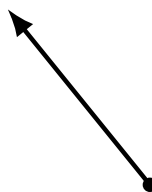
ray



line segment



line segment



ray



ray




line



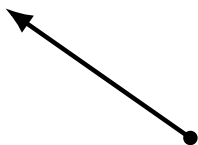
ray



line




line segment



ray




ray



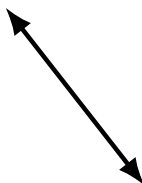
line segment



line segment




line segment



line



line



line