

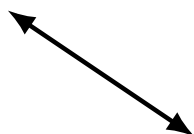
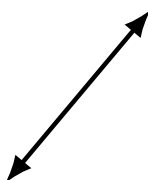
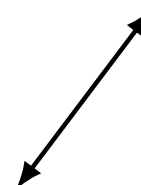
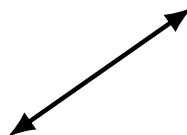
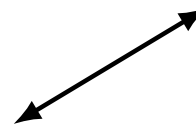
Lines, Line Segments and Rays (B)

Name: _____

Date: _____

Score: _____

Identify each diagram as representing a line, line segment or a ray.



Lines, Line Segments and Rays (B) Answers

Name: _____

Date: _____

Score: _____

Identify each diagram as representing a line, line segment or a ray.



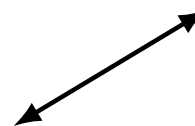
ray



ray



line



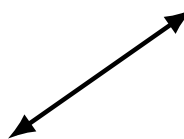
line



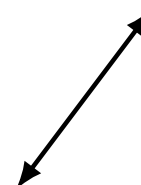
line segment



ray



line




line



line segment



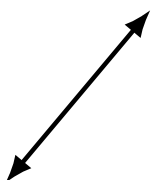
ray



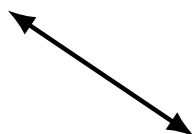
line segment



line



line



line



ray



line segment



line segment



line segment



ray



line segment