

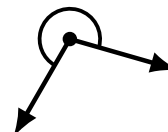
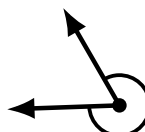
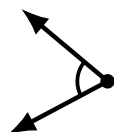
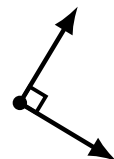
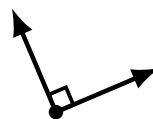

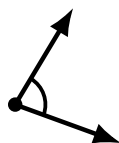

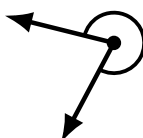

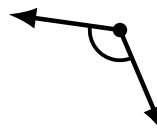
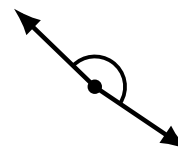
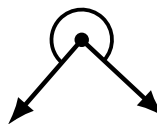
Identifying Angle Types (J)

Name: _____

Date: _____

Score: _____

Identify each angle as acute, obtuse, right, straight, reflex or complete/full.



Identifying Angle Types (J) Answers

Name: _____

Date: _____

Score: _____

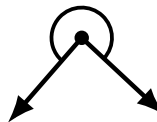
Identify each angle as acute, obtuse, right, straight, reflex or complete/full.



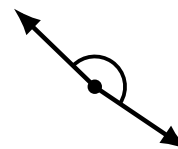
straight



obtuse



reflex



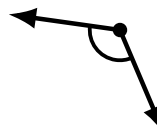
obtuse



acute




obtuse



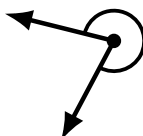
obtuse



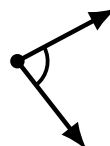
acute



obtuse



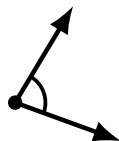
reflex




acute



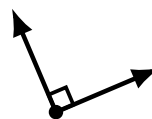
straight



acute



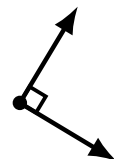
complete/full



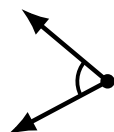
right



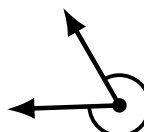
complete/full



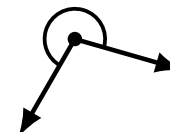
right



acute



reflex



reflex