


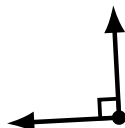
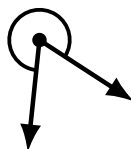
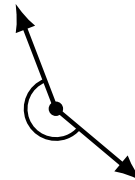
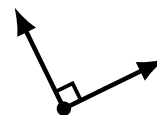
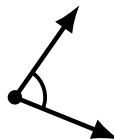

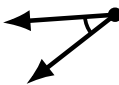
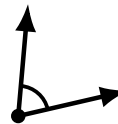
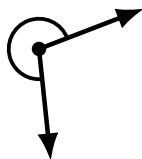
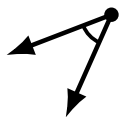
Identifying Angle Types (I)

Name: _____

Date: _____

Score: _____

Identify each angle as acute, obtuse, right, straight, reflex or complete/full.



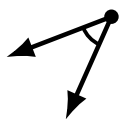
Identifying Angle Types (I) Answers

Name: _____

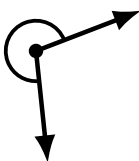
Date: _____

Score: _____

Identify each angle as acute, obtuse, right, straight, reflex or complete/full.



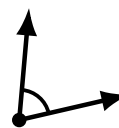
acute



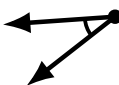
reflex




obtuse



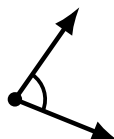
acute



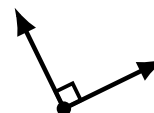
acute



reflex



acute



right



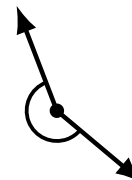
straight



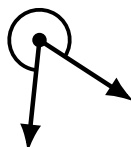
complete/full



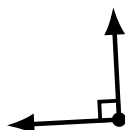
acute



reflex



reflex



right



obtuse



obtuse



obtuse



complete/full



straight



obtuse