

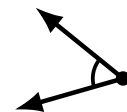
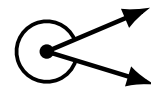
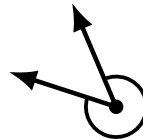
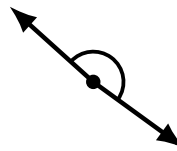
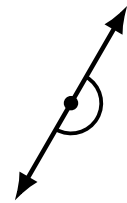
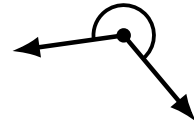
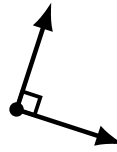
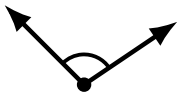
# Identifying Angle Types (H)

Name: \_\_\_\_\_

Date: \_\_\_\_\_

Score: \_\_\_\_\_

Identify each angle as acute, obtuse, right, straight, reflex or complete/full.



# Identifying Angle Types (H) Answers

Name: \_\_\_\_\_

Date: \_\_\_\_\_

Score: \_\_\_\_\_

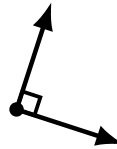
Identify each angle as acute, obtuse, right, straight, reflex or complete/full.



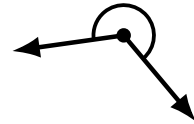
obtuse



acute



right



reflex



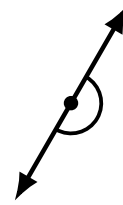
obtuse



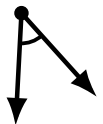
right



obtuse



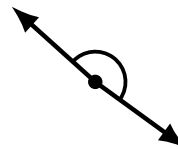
straight



acute



obtuse



obtuse



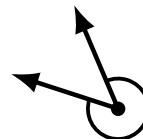
acute



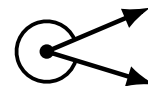
acute



reflex



reflex



reflex



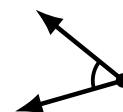
complete/full



straight



complete/full



acute