

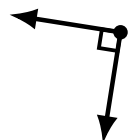

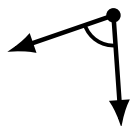
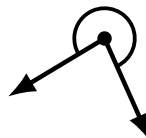
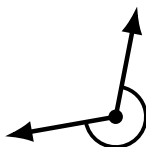
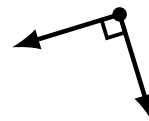
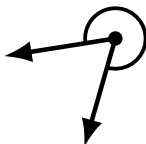
# Identifying Angle Types (G)

Name: \_\_\_\_\_

Date: \_\_\_\_\_

Score: \_\_\_\_\_

Identify each angle as acute, obtuse, right, straight, reflex or complete/full.



# Identifying Angle Types (G) Answers

Name: \_\_\_\_\_

Date: \_\_\_\_\_

Score: \_\_\_\_\_

Identify each angle as acute, obtuse, right, straight, reflex or complete/full.



straight



obtuse



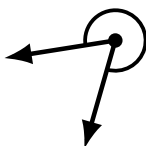
complete/full




obtuse




acute



reflex



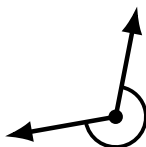
obtuse



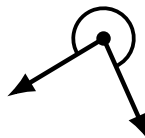
right



straight



reflex



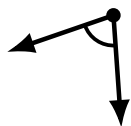
reflex



obtuse




obtuse



acute



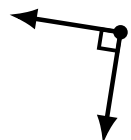
complete/full



reflex



acute



right



acute



acute