


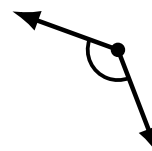
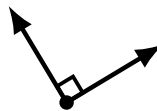
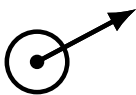
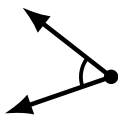
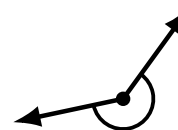
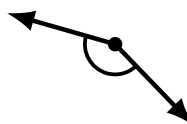

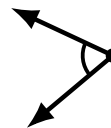
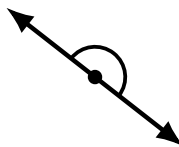
Identifying Angle Types (F)

Name: _____

Date: _____

Score: _____

Identify each angle as acute, obtuse, right, straight, reflex or complete/full.



Identifying Angle Types (F) Answers

Name: _____

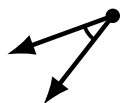
Date: _____

Score: _____

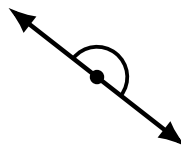
Identify each angle as acute, obtuse, right, straight, reflex or complete/full.



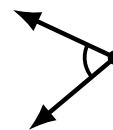
complete/full



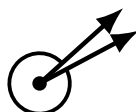
acute



straight



acute



reflex



obtuse



obtuse



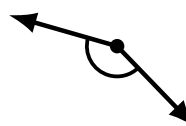
obtuse



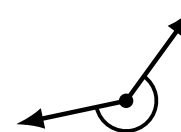
acute



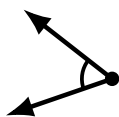
reflex



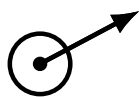
obtuse



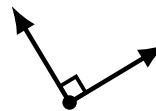
reflex



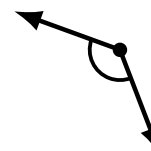
acute



complete/full



right



obtuse



straight



acute



reflex



right