

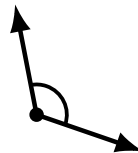
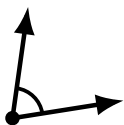
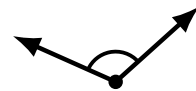
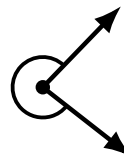
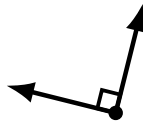
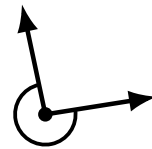
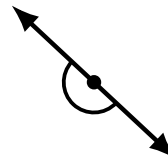

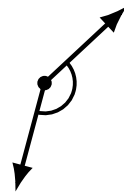
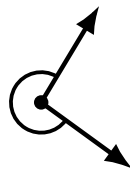
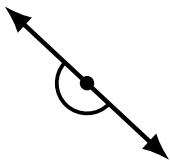
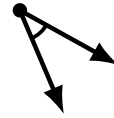
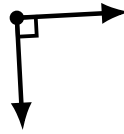
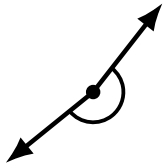
Identifying Angle Types (E)

Name: _____

Date: _____

Score: _____

Identify each angle as acute, obtuse, right, straight, reflex or complete/full.



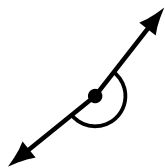
Identifying Angle Types (E) Answers

Name: _____

Date: _____

Score: _____

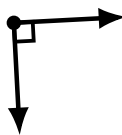
Identify each angle as acute, obtuse, right, straight, reflex or complete/full.



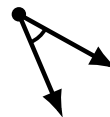
reflex



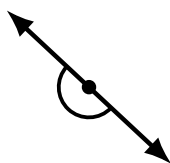
obtuse



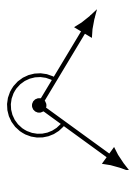
right



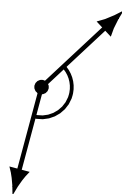
acute



straight




reflex



obtuse



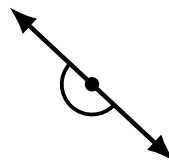
complete/full



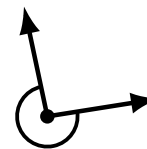
acute



obtuse



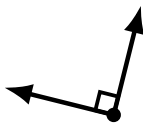
straight



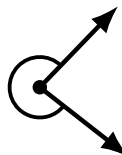
reflex



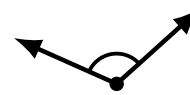
acute



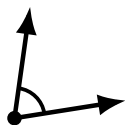
right



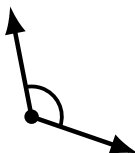
reflex



obtuse



acute



obtuse



complete/full



acute