

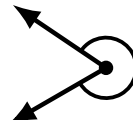

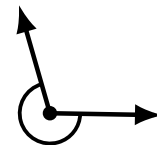
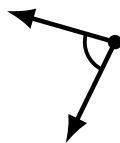
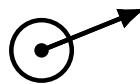
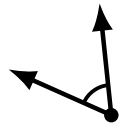
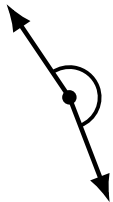
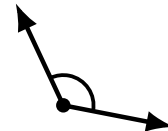
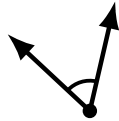
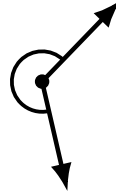
Identifying Angle Types (D)

Name: _____

Date: _____

Score: _____

Identify each angle as acute, obtuse, right, straight, reflex or complete/full.



Identifying Angle Types (D) Answers

Name: _____

Date: _____

Score: _____

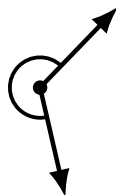
Identify each angle as acute, obtuse, right, straight, reflex or complete/full.



acute



acute



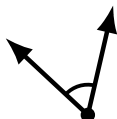
reflex



obtuse



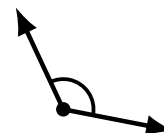
straight



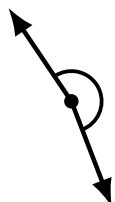
acute



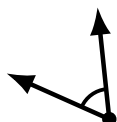
right



obtuse



reflex



acute



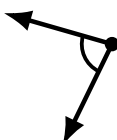
complete/full



obtuse



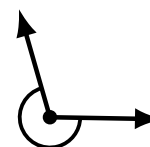
complete/full




acute



right



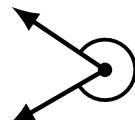
reflex



straight



obtuse



reflex



obtuse