

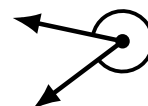
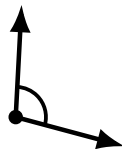
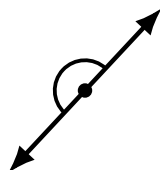

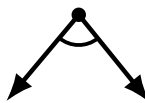
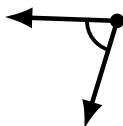
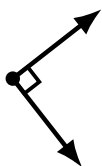
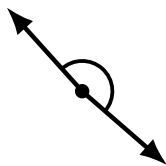
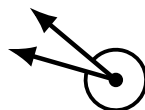
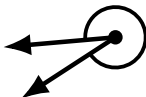
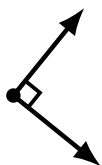
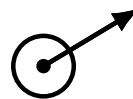
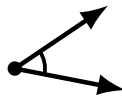
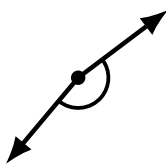
Identifying Angle Types (C)

Name: _____

Date: _____

Score: _____

Identify each angle as acute, obtuse, right, straight, reflex or complete/full.



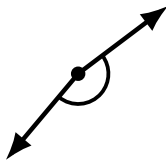
Identifying Angle Types (C) Answers

Name: _____

Date: _____

Score: _____

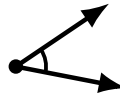
Identify each angle as acute, obtuse, right, straight, reflex or complete/full.



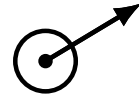
obtuse



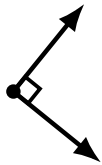
reflex



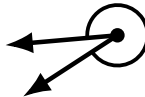
acute



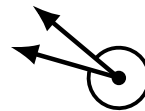
complete/full



right



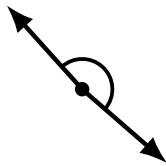
reflex



reflex



obtuse



obtuse



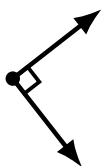
acute



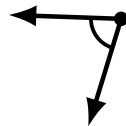
obtuse



straight




right



acute



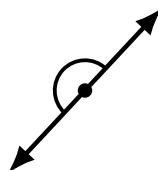
acute



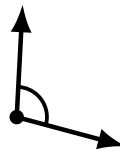
complete/full



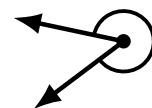
acute



straight



obtuse



reflex