

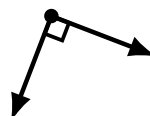
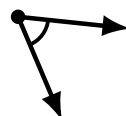
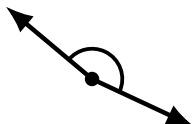
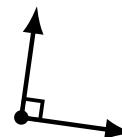
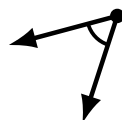
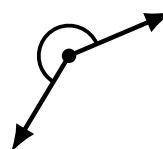

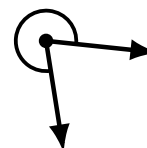
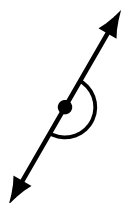
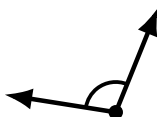
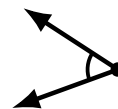
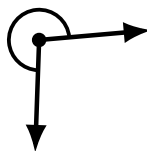

Identifying Angle Types (B)

Name: _____

Date: _____

Score: _____

Identify each angle as acute, obtuse, right, straight, reflex or complete/full.




Identifying Angle Types (B) Answers

Name: _____

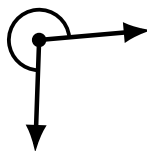
Date: _____

Score: _____

Identify each angle as acute, obtuse, right, straight, reflex or complete/full.



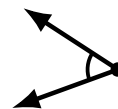
acute



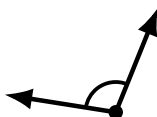
reflex



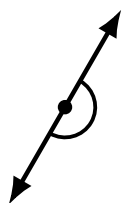
obtuse



acute



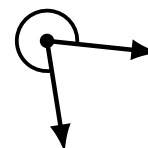
obtuse



straight



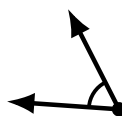
obtuse



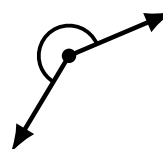
reflex




obtuse



acute



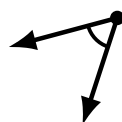
reflex



complete/full



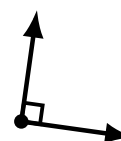
reflex



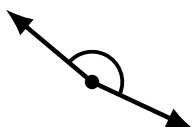
acute



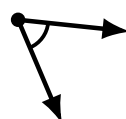
complete/full



right



obtuse



acute



right



straight