

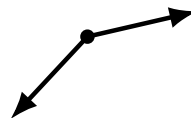
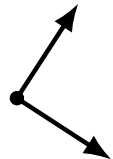
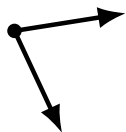
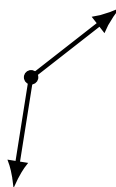
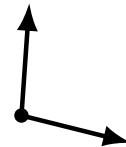
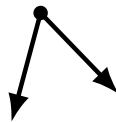
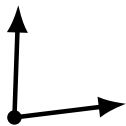
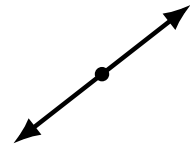
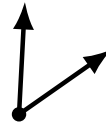
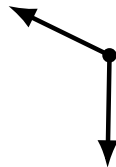
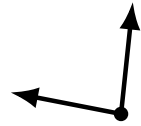
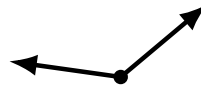
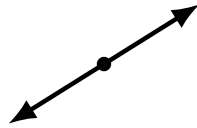
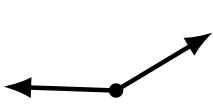
# Identifying Angle Types (A)

Name: \_\_\_\_\_

Date: \_\_\_\_\_

Score: \_\_\_\_\_

Identify each angle as acute, obtuse, right or straight.



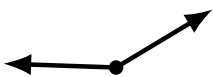
# Identifying Angle Types (A) Answers

Name: \_\_\_\_\_

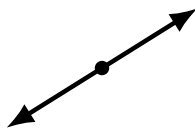
Date: \_\_\_\_\_

Score: \_\_\_\_\_

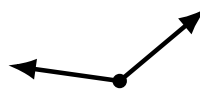
Identify each angle as acute, obtuse, right or straight.



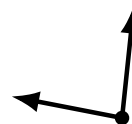
obtuse



straight



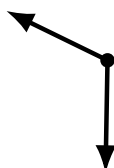
obtuse



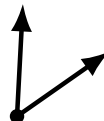
acute



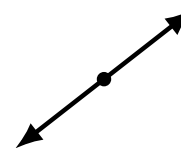
acute



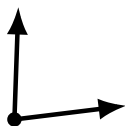
obtuse



acute



straight



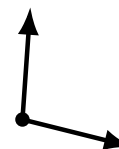
acute



acute



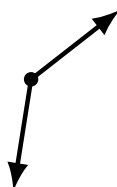
obtuse



obtuse



acute



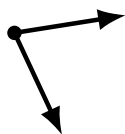
obtuse



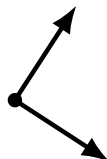
right




acute



acute



right



obtuse



obtuse

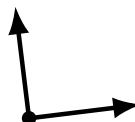
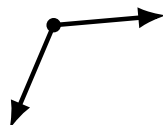
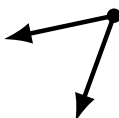
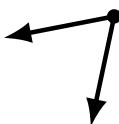
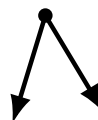
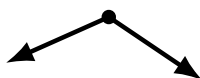
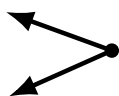
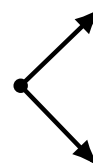
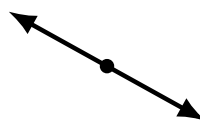
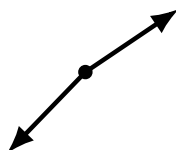
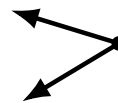
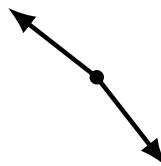
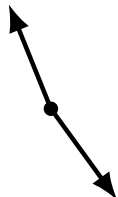
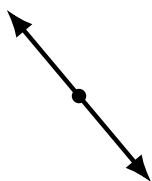
# Identifying Angle Types (B)

Name: \_\_\_\_\_

Date: \_\_\_\_\_

Score: \_\_\_\_\_

Identify each angle as acute, obtuse, right or straight.



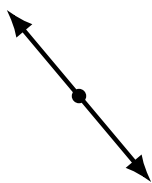
# Identifying Angle Types (B) Answers

Name: \_\_\_\_\_

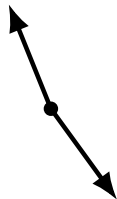
Date: \_\_\_\_\_

Score: \_\_\_\_\_

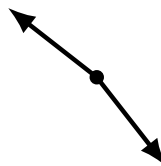
Identify each angle as acute, obtuse, right or straight.



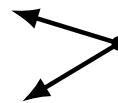
straight



obtuse



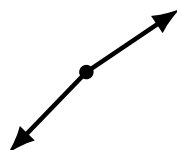
obtuse



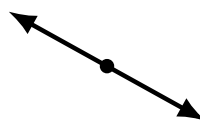
acute



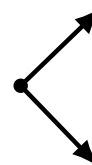
obtuse



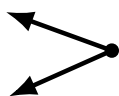
obtuse



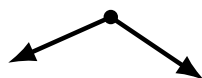
straight



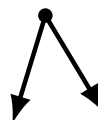
right



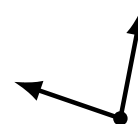
acute



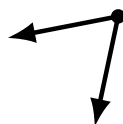
obtuse



acute



acute



acute



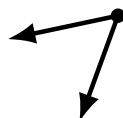
acute



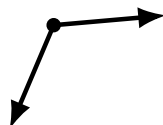
obtuse



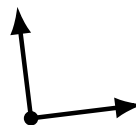
obtuse



acute



obtuse



right



acute

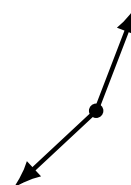
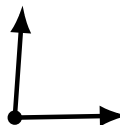

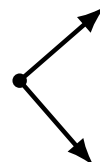
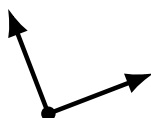
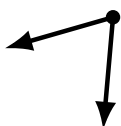
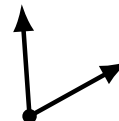
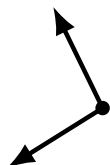
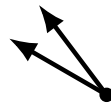
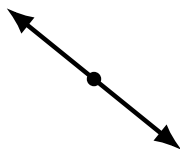
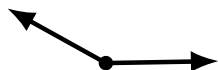
# Identifying Angle Types (C)

Name: \_\_\_\_\_

Date: \_\_\_\_\_

Score: \_\_\_\_\_

Identify each angle as acute, obtuse, right or straight.



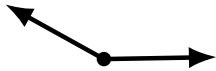
# Identifying Angle Types (C) Answers

Name: \_\_\_\_\_

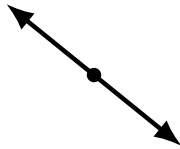
Date: \_\_\_\_\_

Score: \_\_\_\_\_

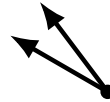
Identify each angle as acute, obtuse, right or straight.



obtuse



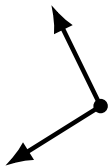
straight



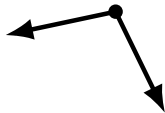
acute



straight



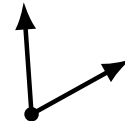
obtuse



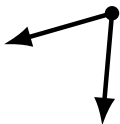
obtuse



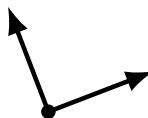
acute



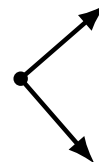
acute



acute



right



right



obtuse



obtuse



obtuse




acute



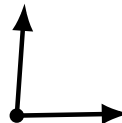
obtuse




acute



acute



acute



obtuse

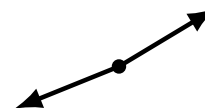
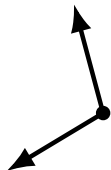
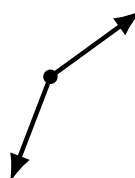
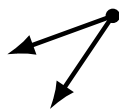
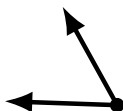
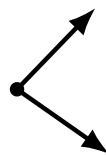
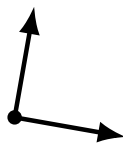
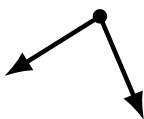
# Identifying Angle Types (D)

Name: \_\_\_\_\_

Date: \_\_\_\_\_

Score: \_\_\_\_\_

Identify each angle as acute, obtuse, right or straight.



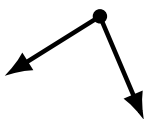
# Identifying Angle Types (D) Answers

Name: \_\_\_\_\_

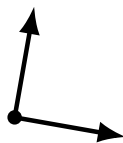
Date: \_\_\_\_\_

Score: \_\_\_\_\_

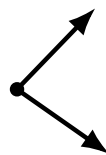
Identify each angle as acute, obtuse, right or straight.



acute



right



acute



obtuse



straight



straight



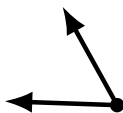
obtuse



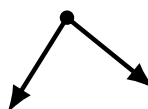
right



obtuse



acute



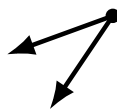
acute



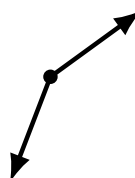
obtuse



obtuse



acute



obtuse



acute



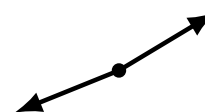
acute



obtuse



acute



obtuse



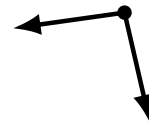
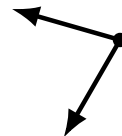
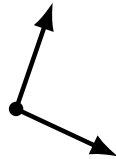
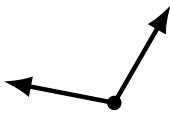
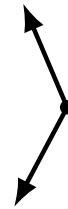
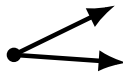
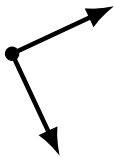
# Identifying Angle Types (E)

Name: \_\_\_\_\_

Date: \_\_\_\_\_

Score: \_\_\_\_\_

Identify each angle as acute, obtuse, right or straight.



# Identifying Angle Types (E) Answers

Name: \_\_\_\_\_

Date: \_\_\_\_\_

Score: \_\_\_\_\_

Identify each angle as acute, obtuse, right or straight.



straight



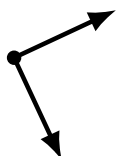
obtuse



acute



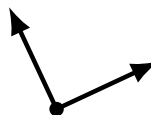
obtuse



right



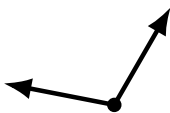
acute



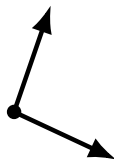
right



obtuse



obtuse



obtuse



acute



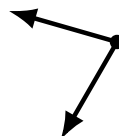
acute



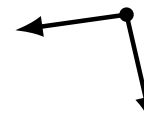
acute



obtuse



acute



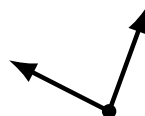
obtuse



acute



obtuse



acute



straight

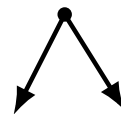
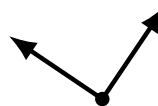
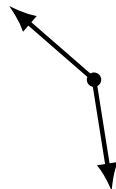
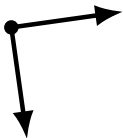
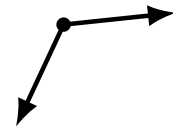
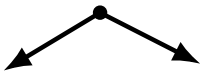
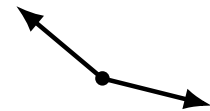
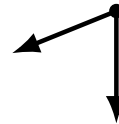
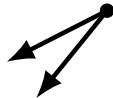
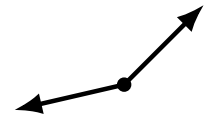
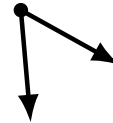
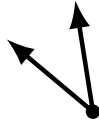
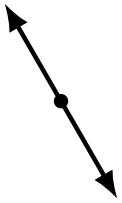
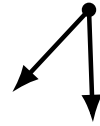
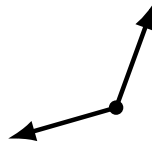
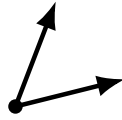

# Identifying Angle Types (F)

Name: \_\_\_\_\_

Date: \_\_\_\_\_

Score: \_\_\_\_\_

Identify each angle as acute, obtuse, right or straight.




# Identifying Angle Types (F) Answers

Name: \_\_\_\_\_

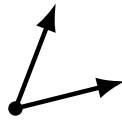
Date: \_\_\_\_\_

Score: \_\_\_\_\_

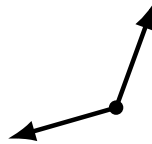
Identify each angle as acute, obtuse, right or straight.



obtuse



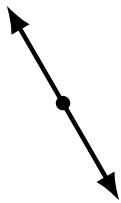
acute



obtuse



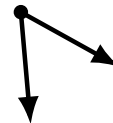
acute



straight



acute



acute



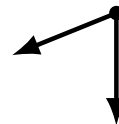
obtuse



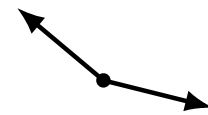
obtuse



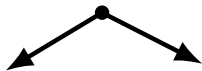
acute



acute



obtuse



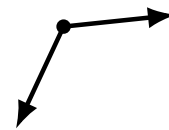
obtuse



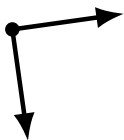
straight



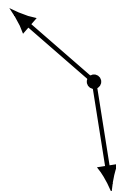
acute



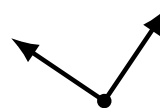
obtuse



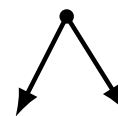
right



obtuse



right



acute

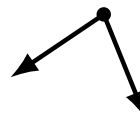
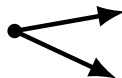
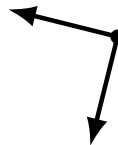
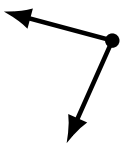
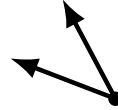
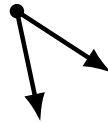
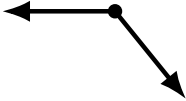
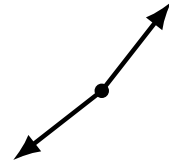
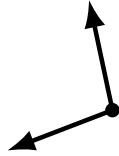
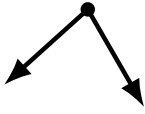
# Identifying Angle Types (G)

Name: \_\_\_\_\_

Date: \_\_\_\_\_

Score: \_\_\_\_\_

Identify each angle as acute, obtuse, right or straight.



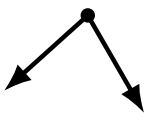
# Identifying Angle Types (G) Answers

Name: \_\_\_\_\_

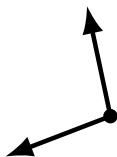
Date: \_\_\_\_\_

Score: \_\_\_\_\_

Identify each angle as acute, obtuse, right or straight.



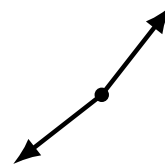
acute



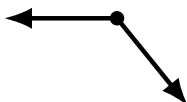
obtuse



straight



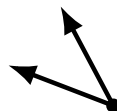
obtuse



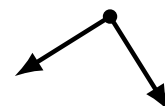
obtuse



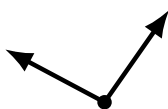
acute



acute



right



obtuse



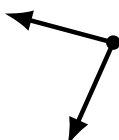
obtuse




obtuse



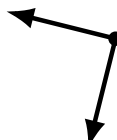
obtuse



acute



acute



right



obtuse



straight



acute



acute



acute


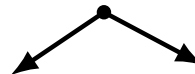
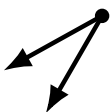

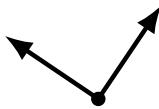
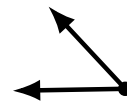
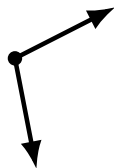
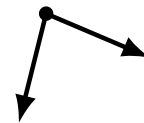
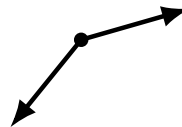
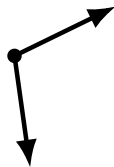
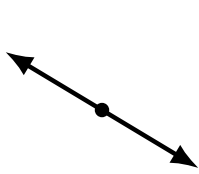
# Identifying Angle Types (H)

Name: \_\_\_\_\_

Date: \_\_\_\_\_

Score: \_\_\_\_\_

Identify each angle as acute, obtuse, right or straight.



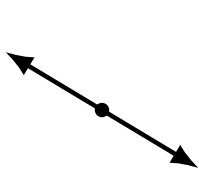
# Identifying Angle Types (H) Answers

Name: \_\_\_\_\_

Date: \_\_\_\_\_

Score: \_\_\_\_\_

Identify each angle as acute, obtuse, right or straight.



straight



obtuse



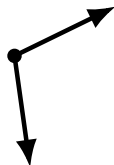
acute



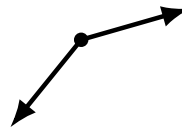
straight



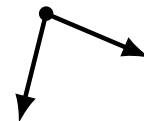
acute



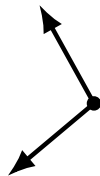
obtuse



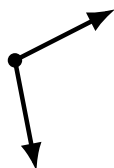
obtuse



acute



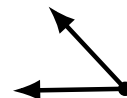
obtuse



obtuse



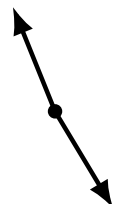
acute



acute



right



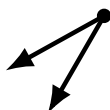
obtuse



right



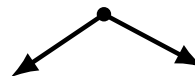
acute



acute



obtuse



obtuse



acute



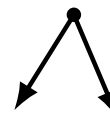
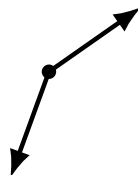
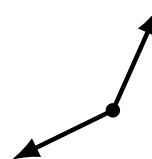
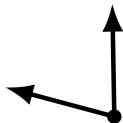
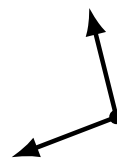
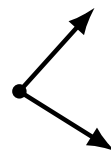
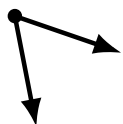
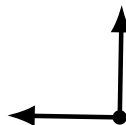
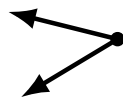
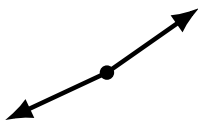
# Identifying Angle Types (I)

Name: \_\_\_\_\_

Date: \_\_\_\_\_

Score: \_\_\_\_\_

Identify each angle as acute, obtuse, right or straight.



# Identifying Angle Types (I) Answers

Name: \_\_\_\_\_

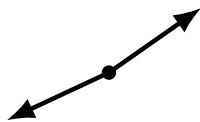
Date: \_\_\_\_\_

Score: \_\_\_\_\_

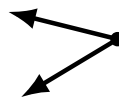
Identify each angle as acute, obtuse, right or straight.



acute



obtuse



acute



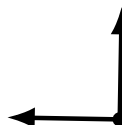
straight



acute



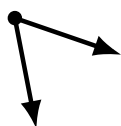
acute



right



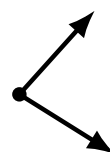
obtuse



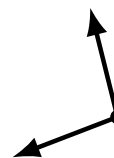
acute



obtuse



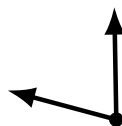
acute



obtuse



obtuse



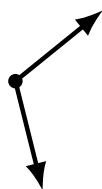
acute



straight



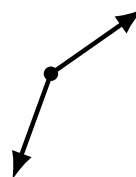
obtuse



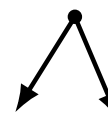
obtuse



right



obtuse



acute

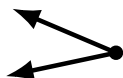
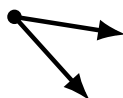
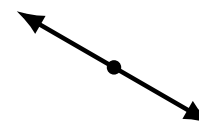
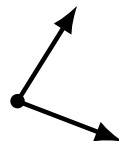
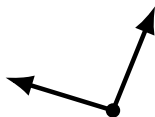
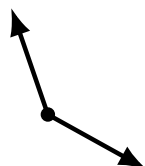
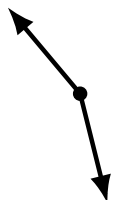
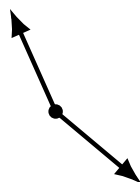
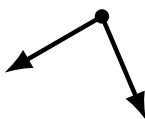
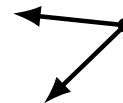
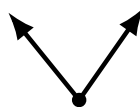
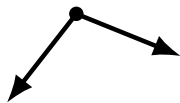
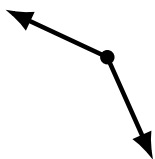
# Identifying Angle Types (J)

Name: \_\_\_\_\_

Date: \_\_\_\_\_

Score: \_\_\_\_\_

Identify each angle as acute, obtuse, right or straight.



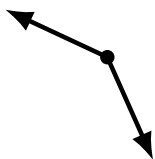
# Identifying Angle Types (J) Answers

Name: \_\_\_\_\_

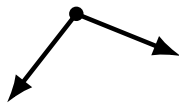
Date: \_\_\_\_\_

Score: \_\_\_\_\_

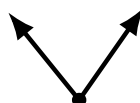
Identify each angle as acute, obtuse, right or straight.



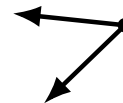
obtuse



obtuse



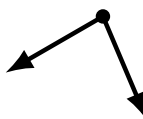
acute



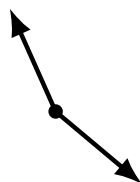
acute



acute



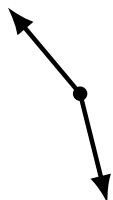
acute



obtuse



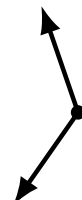
obtuse



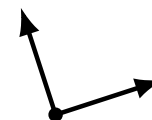
obtuse



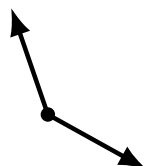
acute



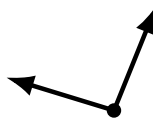
obtuse



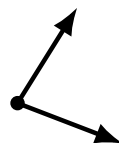
right



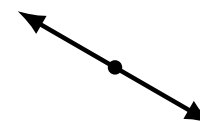
obtuse



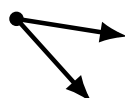
obtuse



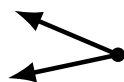
acute



straight



acute



acute



right



straight