

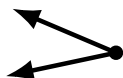
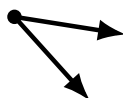
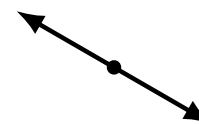
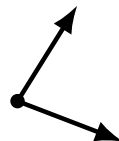
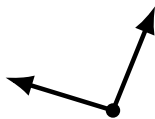
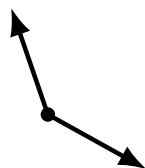
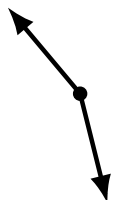
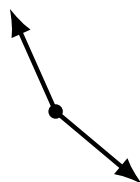
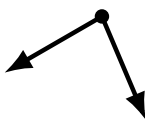
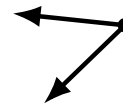
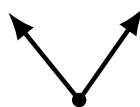
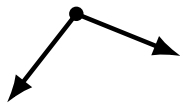
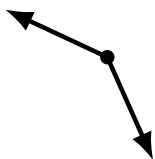
Identifying Angle Types (J)

Name: _____

Date: _____

Score: _____

Identify each angle as acute, obtuse, right or straight.



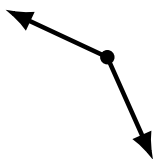
Identifying Angle Types (J) Answers

Name: _____

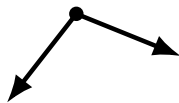
Date: _____

Score: _____

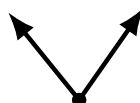
Identify each angle as acute, obtuse, right or straight.



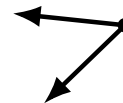
obtuse



obtuse



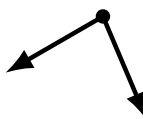
acute



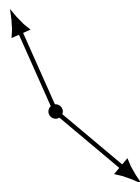
acute



acute



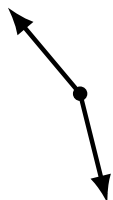
acute



obtuse



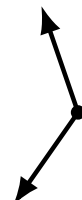
obtuse



obtuse



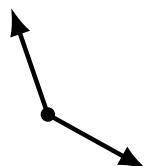
acute



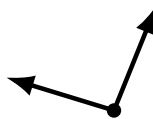
obtuse



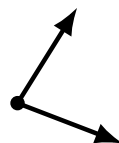
right



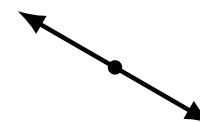
obtuse



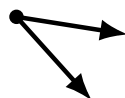
obtuse



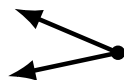
acute



straight



acute



acute



right



straight