

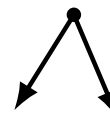
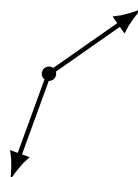
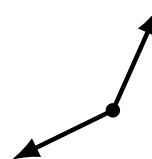
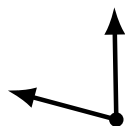
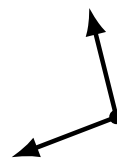
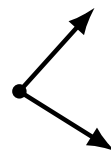
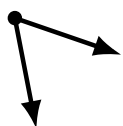
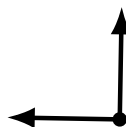
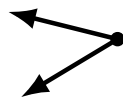
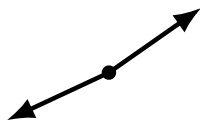
Identifying Angle Types (I)

Name: _____

Date: _____

Score: _____

Identify each angle as acute, obtuse, right or straight.



Identifying Angle Types (I) Answers

Name: _____

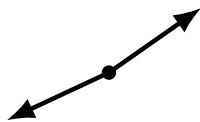
Date: _____

Score: _____

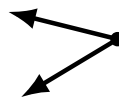
Identify each angle as acute, obtuse, right or straight.



acute



obtuse



acute




straight



acute



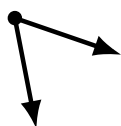
acute



right



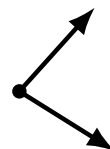
obtuse



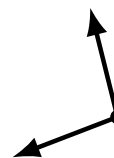
acute



obtuse



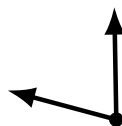
acute



obtuse



obtuse



acute



straight



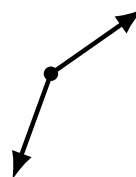
obtuse



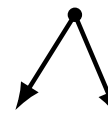
obtuse



right



obtuse



acute