

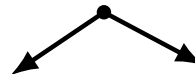

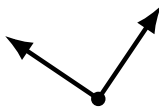
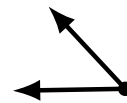
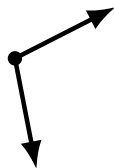
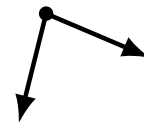
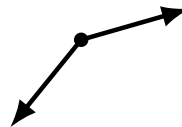
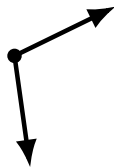
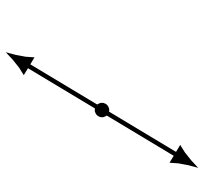
# Identifying Angle Types (H)

Name: \_\_\_\_\_

Date: \_\_\_\_\_

Score: \_\_\_\_\_

Identify each angle as acute, obtuse, right or straight.



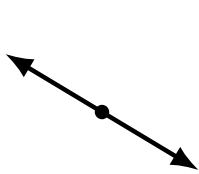
# Identifying Angle Types (H) Answers

Name: \_\_\_\_\_

Date: \_\_\_\_\_

Score: \_\_\_\_\_

Identify each angle as acute, obtuse, right or straight.



straight



obtuse



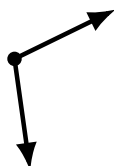
acute



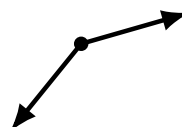
straight



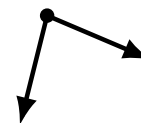
acute



obtuse



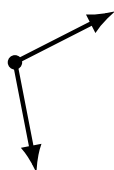
obtuse



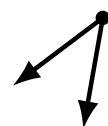
acute



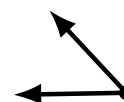
obtuse



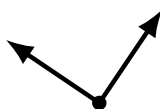
obtuse



acute



acute



right



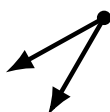
obtuse



right



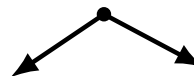
acute



acute



obtuse



obtuse



acute