

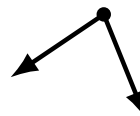
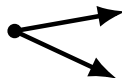
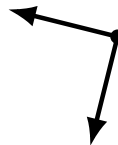
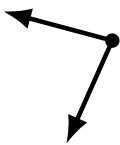
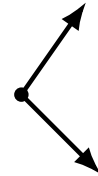
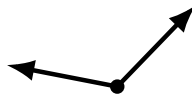
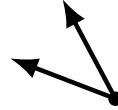
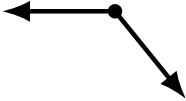
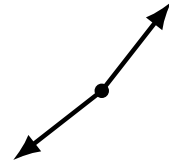
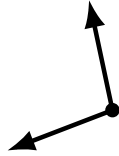
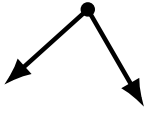
# Identifying Angle Types (G)

Name: \_\_\_\_\_

Date: \_\_\_\_\_

Score: \_\_\_\_\_

Identify each angle as acute, obtuse, right or straight.



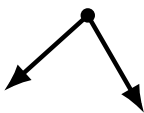
# Identifying Angle Types (G) Answers

Name: \_\_\_\_\_

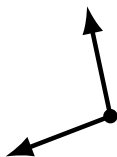
Date: \_\_\_\_\_

Score: \_\_\_\_\_

Identify each angle as acute, obtuse, right or straight.



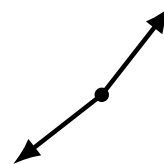
acute



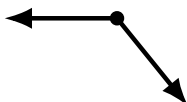
obtuse



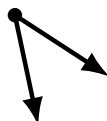
straight



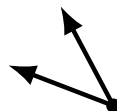
obtuse



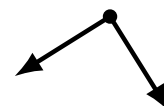
obtuse



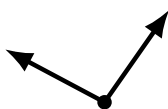
acute



acute



right



obtuse



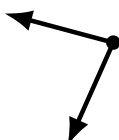
obtuse



obtuse



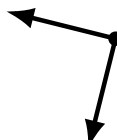
obtuse



acute



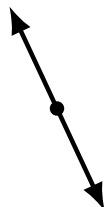
acute



right



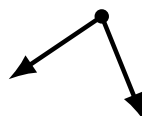
obtuse



straight



acute



acute



acute