

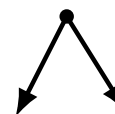
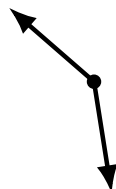
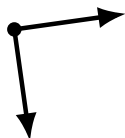
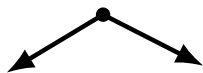
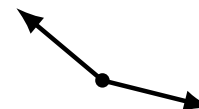
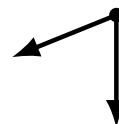
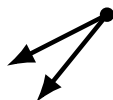
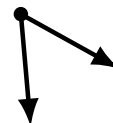
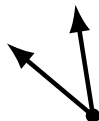
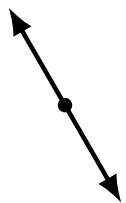
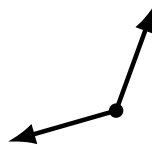
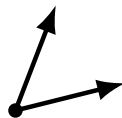
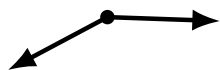
Identifying Angle Types (F)

Name: _____

Date: _____

Score: _____

Identify each angle as acute, obtuse, right or straight.



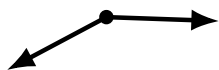
Identifying Angle Types (F) Answers

Name: _____

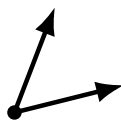
Date: _____

Score: _____

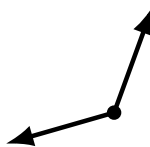
Identify each angle as acute, obtuse, right or straight.



obtuse



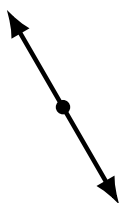
acute



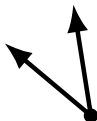
obtuse



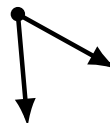
acute



straight



acute




acute



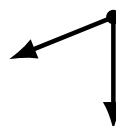
obtuse



obtuse



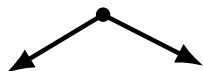
acute



acute



obtuse



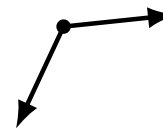
obtuse



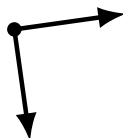
straight



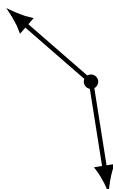
acute



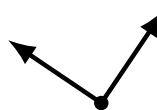
obtuse



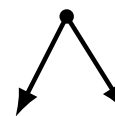
right



obtuse



right



acute