

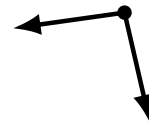
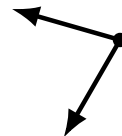
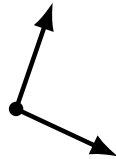
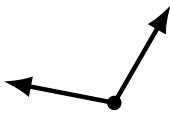
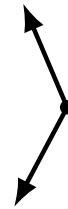
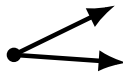
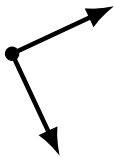
# Identifying Angle Types (E)

Name: \_\_\_\_\_

Date: \_\_\_\_\_

Score: \_\_\_\_\_

Identify each angle as acute, obtuse, right or straight.



# Identifying Angle Types (E) Answers

Name: \_\_\_\_\_

Date: \_\_\_\_\_

Score: \_\_\_\_\_

Identify each angle as acute, obtuse, right or straight.



straight



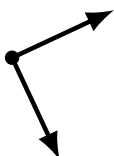
obtuse



acute



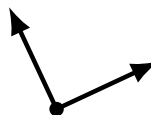
obtuse



right



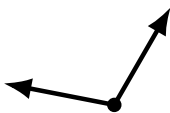
acute



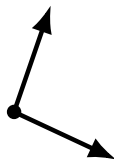
right



obtuse



obtuse



obtuse



acute



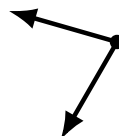
acute



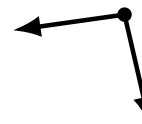
acute



obtuse



acute



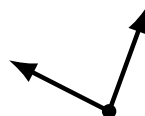
obtuse



acute



obtuse



acute



straight