

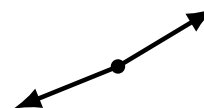
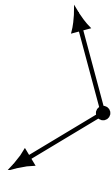
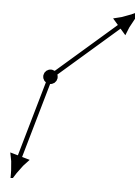
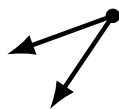
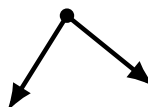
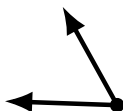

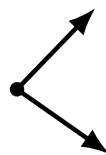
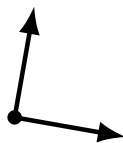
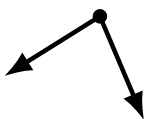
Identifying Angle Types (D)

Name: _____

Date: _____

Score: _____

Identify each angle as acute, obtuse, right or straight.



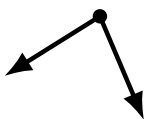
Identifying Angle Types (D) Answers

Name: _____

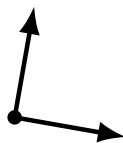
Date: _____

Score: _____

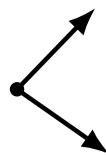
Identify each angle as acute, obtuse, right or straight.



acute



right



acute



obtuse



straight



straight



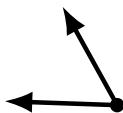
obtuse



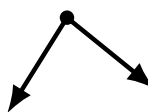
right



obtuse



acute



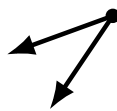
acute



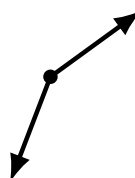
obtuse



obtuse



acute



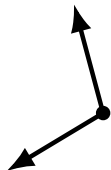
obtuse



acute



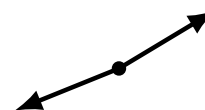
acute



obtuse



acute



obtuse