

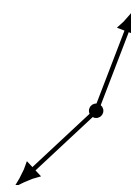
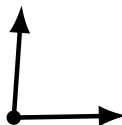

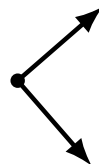
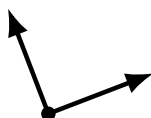
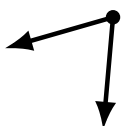
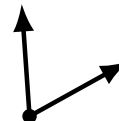
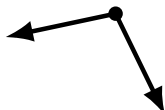
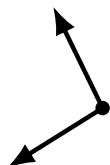
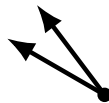
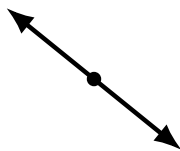
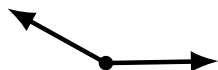
Identifying Angle Types (C)

Name: _____

Date: _____

Score: _____

Identify each angle as acute, obtuse, right or straight.



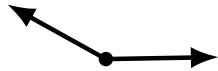
Identifying Angle Types (C) Answers

Name: _____

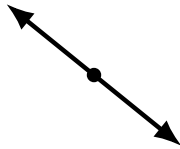
Date: _____

Score: _____

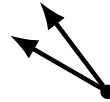
Identify each angle as acute, obtuse, right or straight.



obtuse



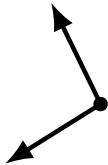
straight



acute



straight



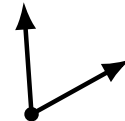
obtuse



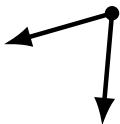
obtuse



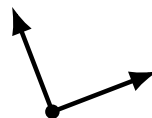
acute



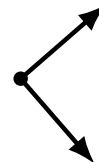
acute



acute



right



right



obtuse



obtuse



obtuse




acute



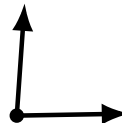
obtuse




acute



acute



acute



obtuse