

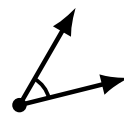
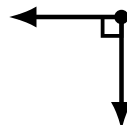
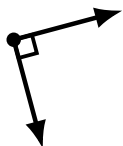
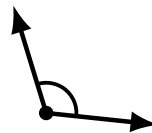
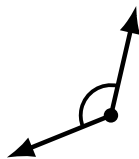
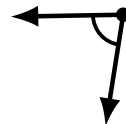
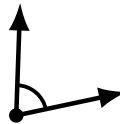
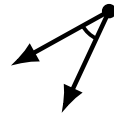
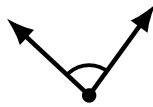
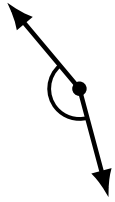
Identifying Angle Types (A)

Name: _____

Date: _____

Score: _____

Identify each angle as acute, obtuse, right or straight.



Identifying Angle Types (A) Answers

Name: _____

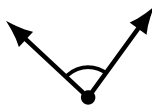
Date: _____

Score: _____

Identify each angle as acute, obtuse, right or straight.



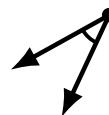
obtuse



acute



straight



acute



straight



obtuse



obtuse



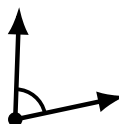
obtuse



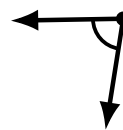
acute



obtuse



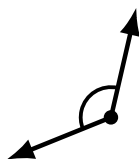
acute



acute



acute



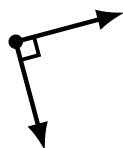
obtuse



obtuse



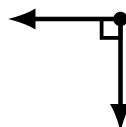
acute



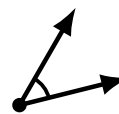
right



obtuse



right



acute

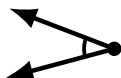
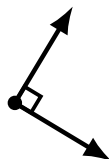
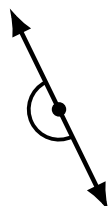
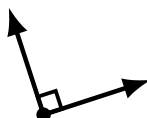
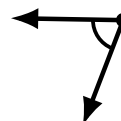
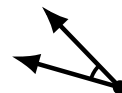
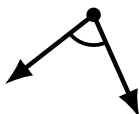
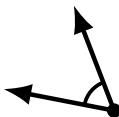
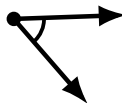
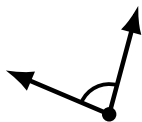
Identifying Angle Types (B)

Name: _____

Date: _____

Score: _____

Identify each angle as acute, obtuse, right or straight.



Identifying Angle Types (B) Answers

Name: _____

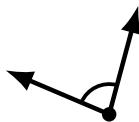
Date: _____

Score: _____

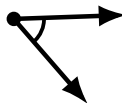
Identify each angle as acute, obtuse, right or straight.



obtuse



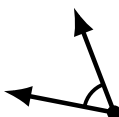
acute



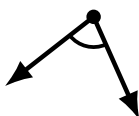
acute



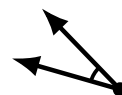
obtuse



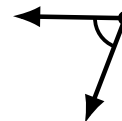
acute



acute



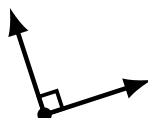
acute



acute



acute



right



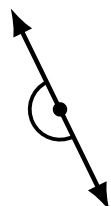
obtuse



straight



obtuse



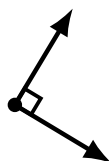
straight



obtuse



obtuse




right



acute



obtuse



obtuse

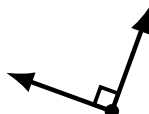
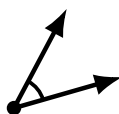
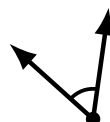
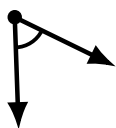
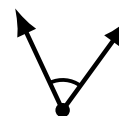
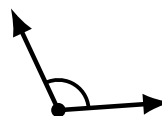
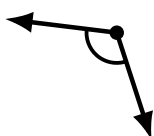
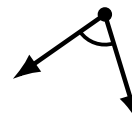
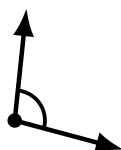
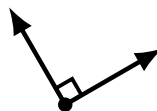
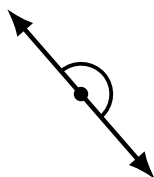
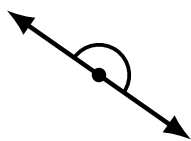
Identifying Angle Types (C)

Name: _____

Date: _____

Score: _____

Identify each angle as acute, obtuse, right or straight.



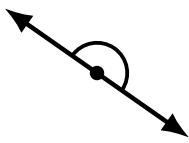
Identifying Angle Types (C) Answers

Name: _____

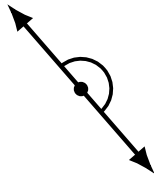
Date: _____

Score: _____

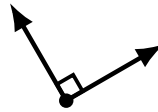
Identify each angle as acute, obtuse, right or straight.



straight



straight



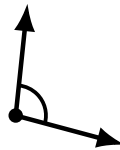
right



obtuse



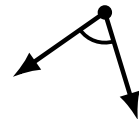
obtuse



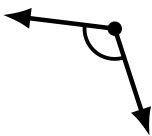
obtuse



acute



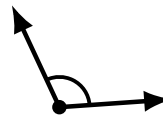
acute



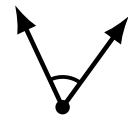
obtuse



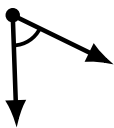
obtuse



obtuse



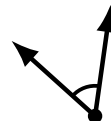
acute



acute



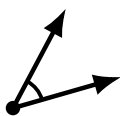
acute



acute



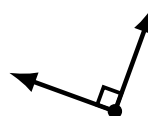
obtuse



acute



obtuse



right



acute

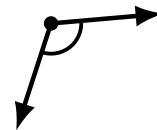
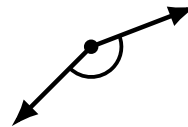
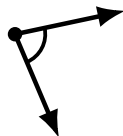
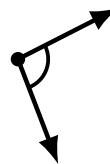
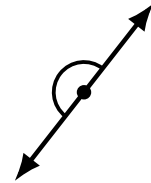
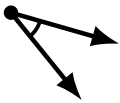
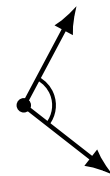
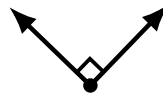
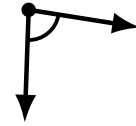
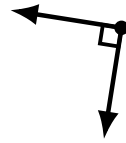
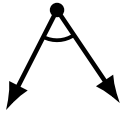
Identifying Angle Types (D)

Name: _____

Date: _____

Score: _____

Identify each angle as acute, obtuse, right or straight.



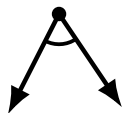
Identifying Angle Types (D) Answers

Name: _____

Date: _____

Score: _____

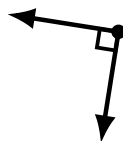
Identify each angle as acute, obtuse, right or straight.



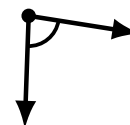
acute



obtuse



right



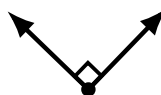
acute



straight



acute



right



obtuse



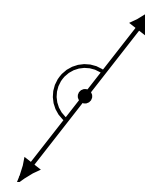
acute



obtuse



acute



straight



obtuse



acute



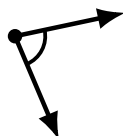
acute



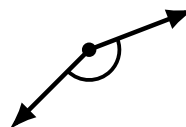
obtuse



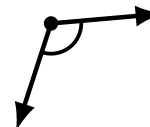
obtuse



acute



obtuse



obtuse

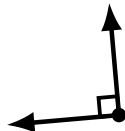
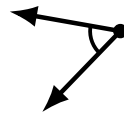
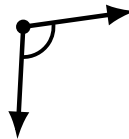
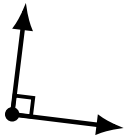
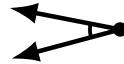
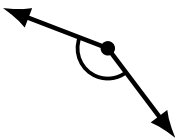

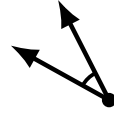
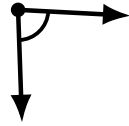
Identifying Angle Types (E)

Name: _____

Date: _____

Score: _____

Identify each angle as acute, obtuse, right or straight.



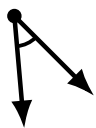
Identifying Angle Types (E) Answers

Name: _____

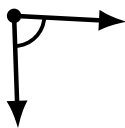
Date: _____

Score: _____

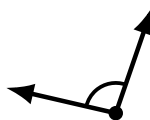
Identify each angle as acute, obtuse, right or straight.



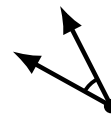
acute




acute



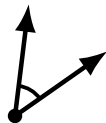
obtuse



acute



acute



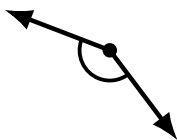
acute



obtuse



obtuse



obtuse



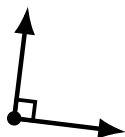
obtuse



straight



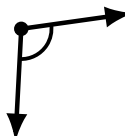
acute



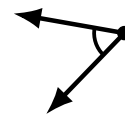
right



obtuse



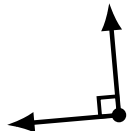
obtuse



acute



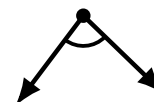
obtuse



right



straight



acute

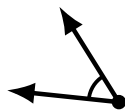
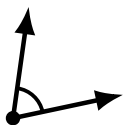
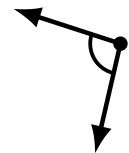
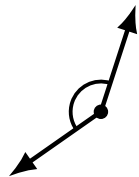
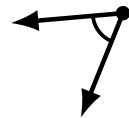
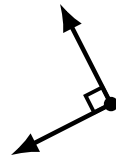

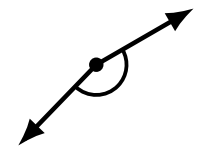
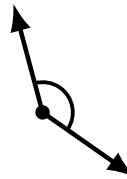
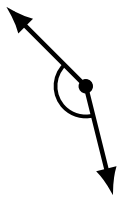
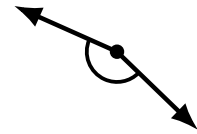
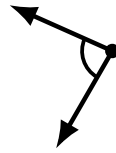
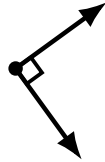
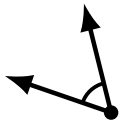
Identifying Angle Types (F)

Name: _____

Date: _____

Score: _____

Identify each angle as acute, obtuse, right or straight.



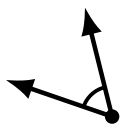
Identifying Angle Types (F) Answers

Name: _____

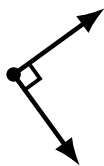
Date: _____

Score: _____

Identify each angle as acute, obtuse, right or straight.



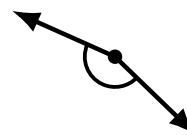
acute



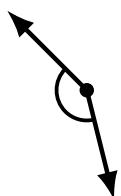
right



acute



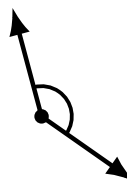
obtuse



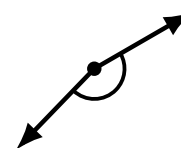
obtuse




straight



obtuse



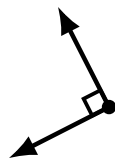
obtuse



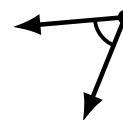
acute



obtuse



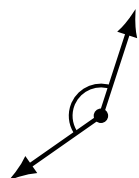
right



acute



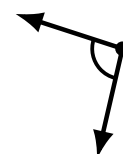
obtuse



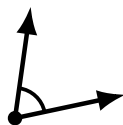
obtuse



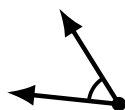
acute



obtuse



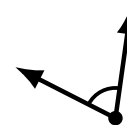
acute



acute



straight



acute

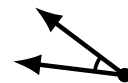
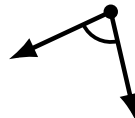

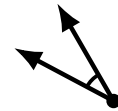
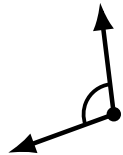
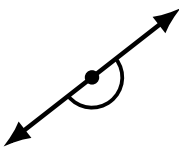
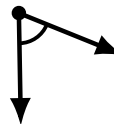
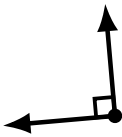
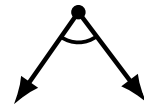
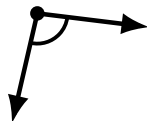
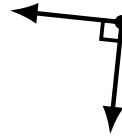
Identifying Angle Types (G)

Name: _____

Date: _____

Score: _____

Identify each angle as acute, obtuse, right or straight.



Identifying Angle Types (G) Answers

Name: _____

Date: _____

Score: _____

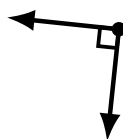
Identify each angle as acute, obtuse, right or straight.



obtuse



acute



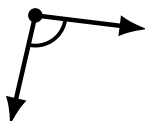
right



obtuse



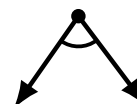
obtuse



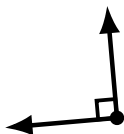
obtuse



obtuse



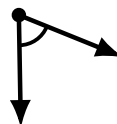
acute



right



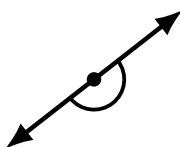
acute



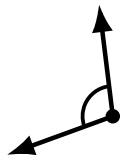
acute



straight



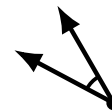
straight



obtuse



acute



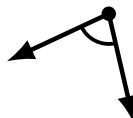
acute



obtuse



obtuse



acute



acute

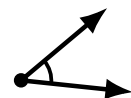

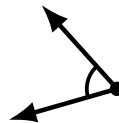
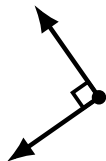
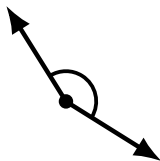
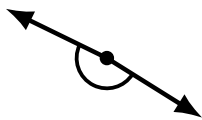
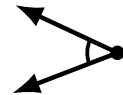
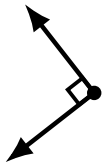
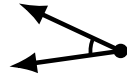
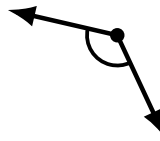
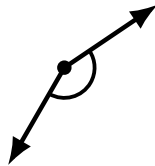

Identifying Angle Types (H)

Name: _____

Date: _____

Score: _____

Identify each angle as acute, obtuse, right or straight.




Identifying Angle Types (H) Answers

Name: _____

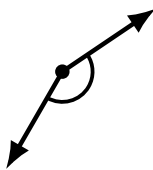
Date: _____

Score: _____

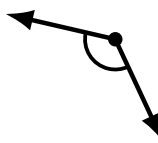
Identify each angle as acute, obtuse, right or straight.



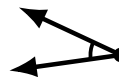
straight



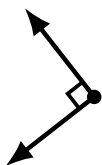
obtuse



obtuse



acute



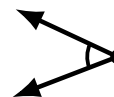
right



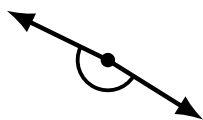
obtuse



acute



acute



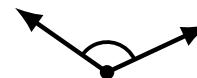
obtuse



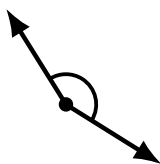
obtuse



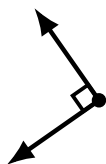
straight



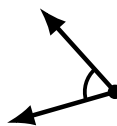
obtuse



obtuse



right



acute



obtuse



acute



acute



acute



acute


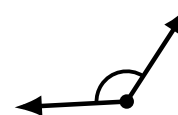
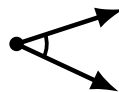
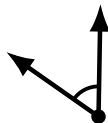
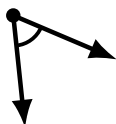
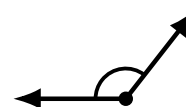
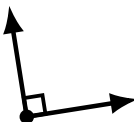
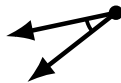
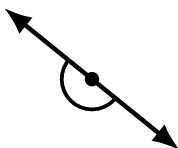
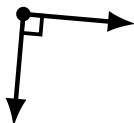
Identifying Angle Types (I)

Name: _____

Date: _____

Score: _____

Identify each angle as acute, obtuse, right or straight.



Identifying Angle Types (I) Answers

Name: _____

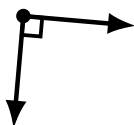
Date: _____

Score: _____

Identify each angle as acute, obtuse, right or straight.



obtuse



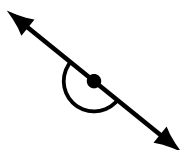
right



acute



straight



straight



obtuse



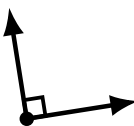
acute



acute



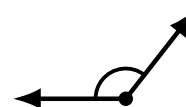
obtuse



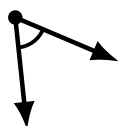
right



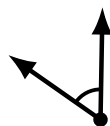
acute



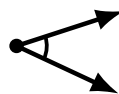
obtuse



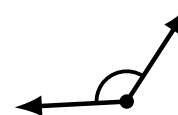
acute



acute




acute



obtuse



acute



obtuse



obtuse



obtuse

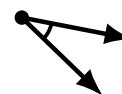
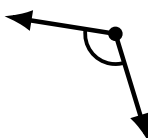
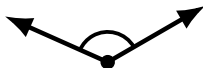
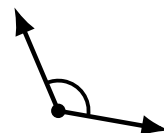
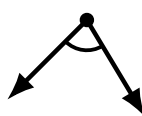
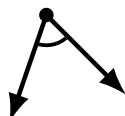
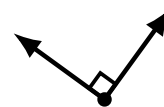
Identifying Angle Types (J)

Name: _____

Date: _____

Score: _____

Identify each angle as acute, obtuse, right or straight.



Identifying Angle Types (J) Answers

Name: _____

Date: _____

Score: _____

Identify each angle as acute, obtuse, right or straight.



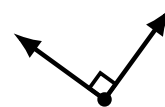
acute




obtuse



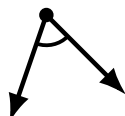
acute



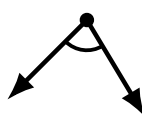
right



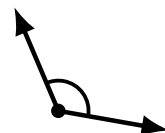
obtuse



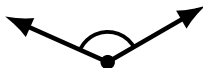
acute



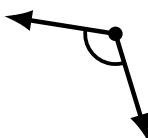
acute



obtuse



obtuse



obtuse



acute



obtuse



straight



obtuse



obtuse



acute



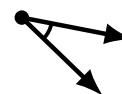
right



straight



acute



acute