

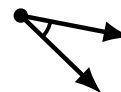
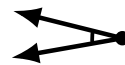

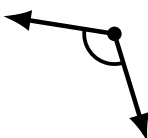
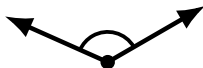
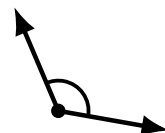
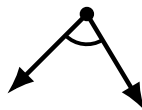
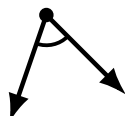
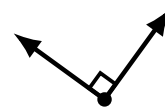
Identifying Angle Types (J)

Name: _____

Date: _____

Score: _____

Identify each angle as acute, obtuse, right or straight.



Identifying Angle Types (J) Answers

Name: _____

Date: _____

Score: _____

Identify each angle as acute, obtuse, right or straight.



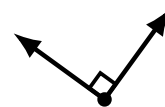
acute




obtuse



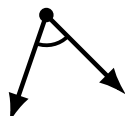
acute



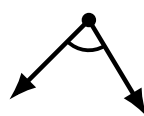
right



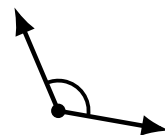
obtuse



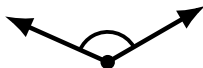
acute



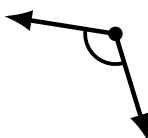
acute



obtuse



obtuse



obtuse



acute



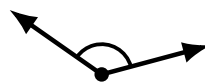
obtuse



straight



obtuse



obtuse



acute



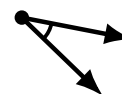
right



straight



acute



acute