


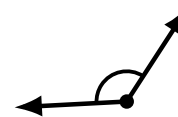
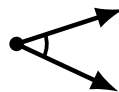
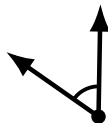
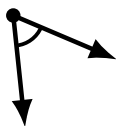
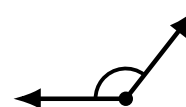
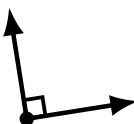
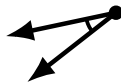
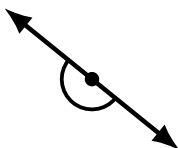
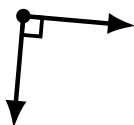
Identifying Angle Types (I)

Name: _____

Date: _____

Score: _____

Identify each angle as acute, obtuse, right or straight.



Identifying Angle Types (I) Answers

Name: _____

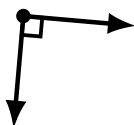
Date: _____

Score: _____

Identify each angle as acute, obtuse, right or straight.



obtuse



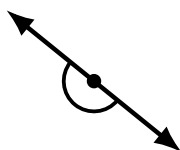
right



acute



straight



straight



obtuse



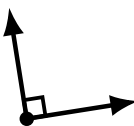
acute



acute



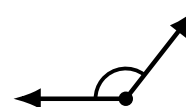
obtuse



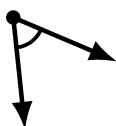
right



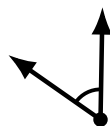
acute



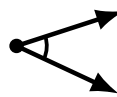
obtuse



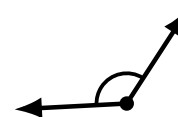
acute



acute




acute



obtuse



acute



obtuse



obtuse



obtuse