

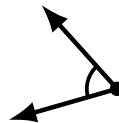
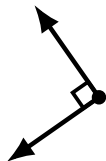
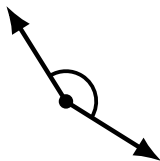
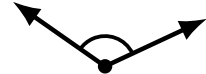
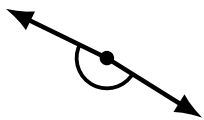
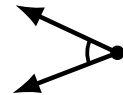
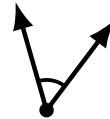
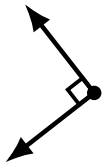
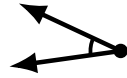
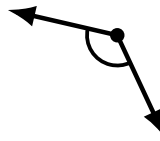
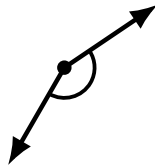

Identifying Angle Types (H)

Name: _____

Date: _____

Score: _____

Identify each angle as acute, obtuse, right or straight.




Identifying Angle Types (H) Answers

Name: _____

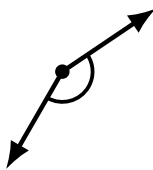
Date: _____

Score: _____

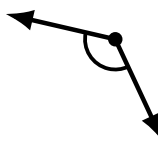
Identify each angle as acute, obtuse, right or straight.



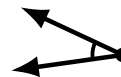
straight



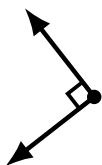
obtuse



obtuse



acute



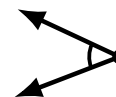
right



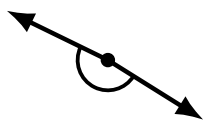
obtuse



acute



acute



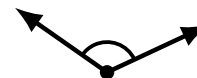
obtuse



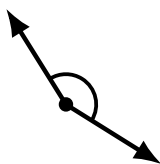
obtuse



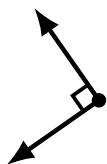
straight



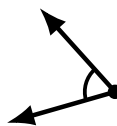
obtuse



obtuse



right



acute



obtuse



acute



acute



acute



acute