

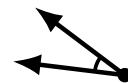
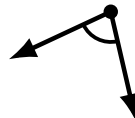

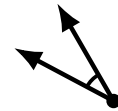
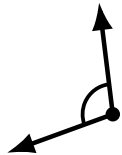
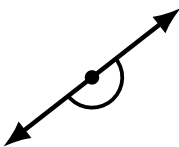
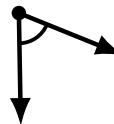
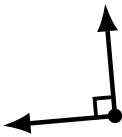
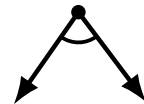
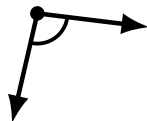
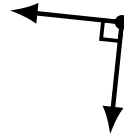
# Identifying Angle Types (G)

Name: \_\_\_\_\_

Date: \_\_\_\_\_

Score: \_\_\_\_\_

Identify each angle as acute, obtuse, right or straight.



# Identifying Angle Types (G) Answers

Name: \_\_\_\_\_

Date: \_\_\_\_\_

Score: \_\_\_\_\_

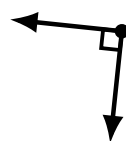
Identify each angle as acute, obtuse, right or straight.



obtuse



acute



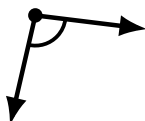
right



obtuse



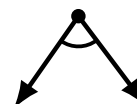
obtuse



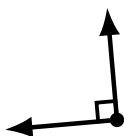
obtuse



obtuse



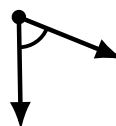
acute



right



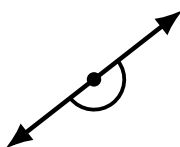
acute



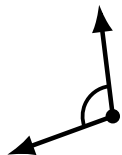
acute



straight



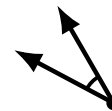
straight



obtuse



acute



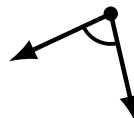
acute



obtuse



obtuse



acute



acute