

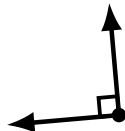
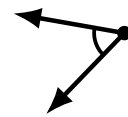
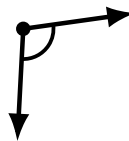
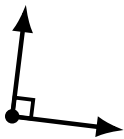
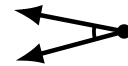
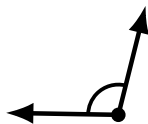
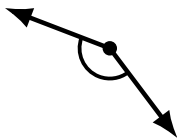

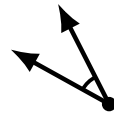
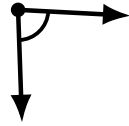
Identifying Angle Types (E)

Name: _____

Date: _____

Score: _____

Identify each angle as acute, obtuse, right or straight.



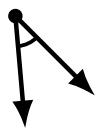
Identifying Angle Types (E) Answers

Name: _____

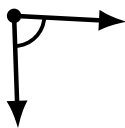
Date: _____

Score: _____

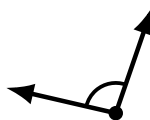
Identify each angle as acute, obtuse, right or straight.



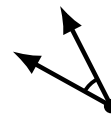
acute




acute



obtuse



acute



acute



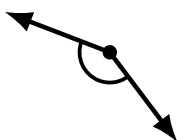
acute



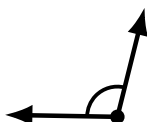
obtuse



obtuse



obtuse



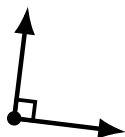
obtuse



straight



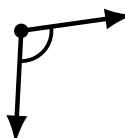
acute



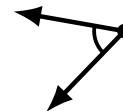
right



obtuse



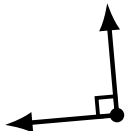
obtuse



acute



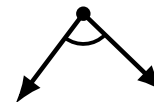
obtuse



right



straight



acute