

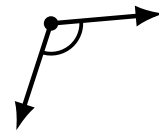
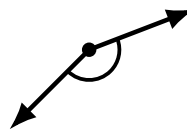
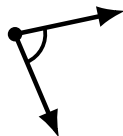
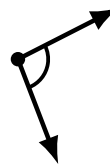
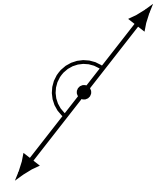
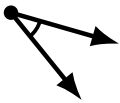
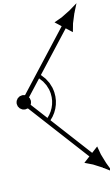
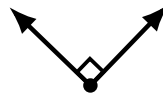
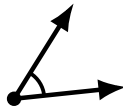
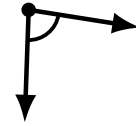
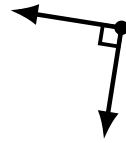
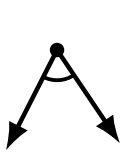
Identifying Angle Types (D)

Name: _____

Date: _____

Score: _____

Identify each angle as acute, obtuse, right or straight.



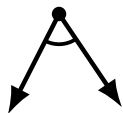
Identifying Angle Types (D) Answers

Name: _____

Date: _____

Score: _____

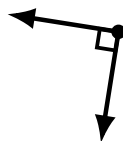
Identify each angle as acute, obtuse, right or straight.



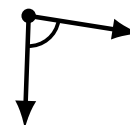
acute



obtuse



right



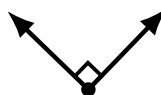
acute



straight



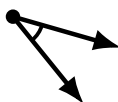
acute



right



obtuse



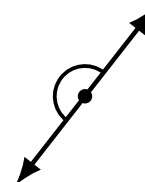
acute



obtuse



acute



straight



obtuse



acute



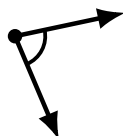
acute



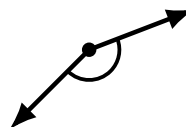
obtuse



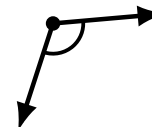
obtuse



acute



obtuse



obtuse