

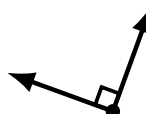
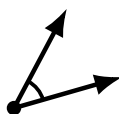
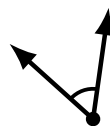
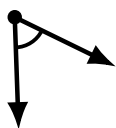
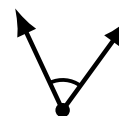
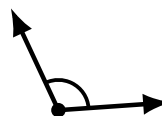
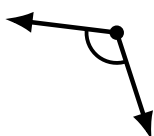
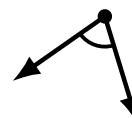
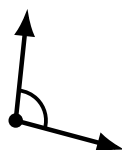
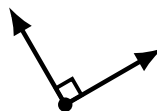
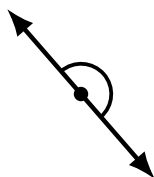
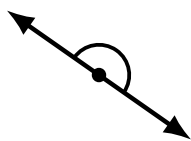
# Identifying Angle Types (C)

Name: \_\_\_\_\_

Date: \_\_\_\_\_

Score: \_\_\_\_\_

Identify each angle as acute, obtuse, right or straight.



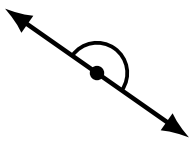
# Identifying Angle Types (C) Answers

Name: \_\_\_\_\_

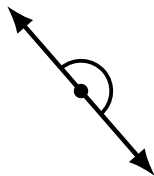
Date: \_\_\_\_\_

Score: \_\_\_\_\_

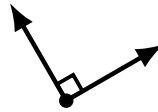
Identify each angle as acute, obtuse, right or straight.



straight



straight



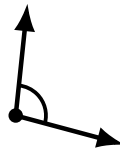
right



obtuse



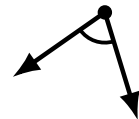
obtuse



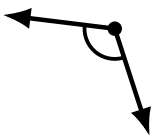
obtuse



acute



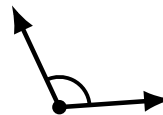
acute



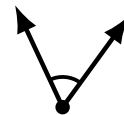
obtuse



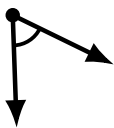
obtuse



obtuse



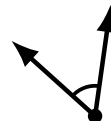
acute



acute



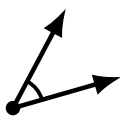
acute



acute



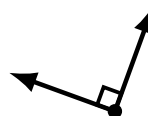
obtuse



acute



obtuse



right



acute