

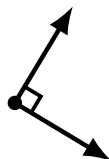
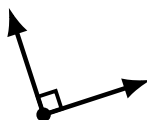
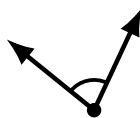
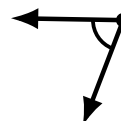
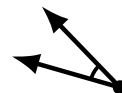
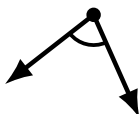
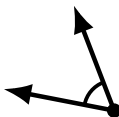
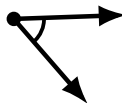
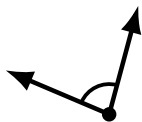
Identifying Angle Types (B)

Name: _____

Date: _____

Score: _____

Identify each angle as acute, obtuse, right or straight.



Identifying Angle Types (B) Answers

Name: _____

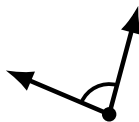
Date: _____

Score: _____

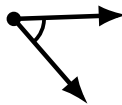
Identify each angle as acute, obtuse, right or straight.



obtuse



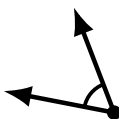
acute



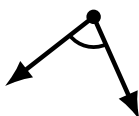
acute



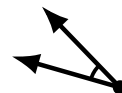
obtuse



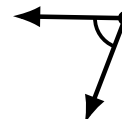
acute



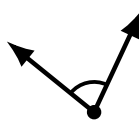
acute



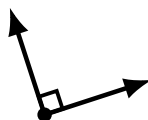
acute



acute



acute



right



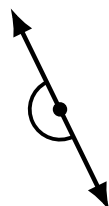
obtuse



straight



obtuse



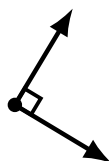
straight



obtuse



obtuse



right



acute



obtuse



obtuse