

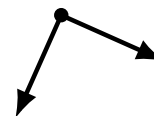
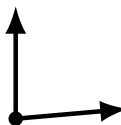
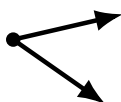
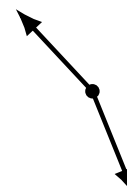
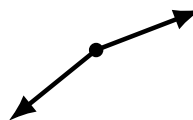
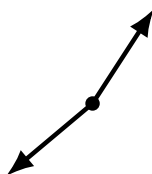

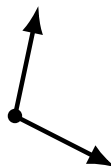
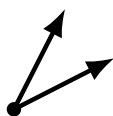
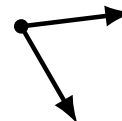
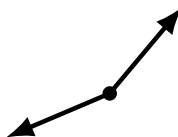
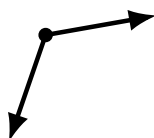
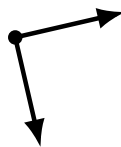
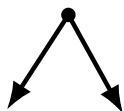
Identifying Angle Types (J)

Name: _____

Date: _____

Score: _____

Identify each angle as acute, obtuse or right.



Identifying Angle Types (J) Answers

Name: _____

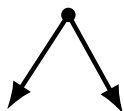
Date: _____

Score: _____

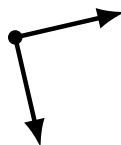
Identify each angle as acute, obtuse or right.



obtuse



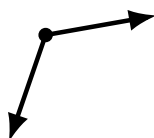
acute



right




acute



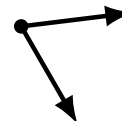
obtuse



obtuse



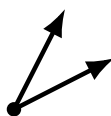
obtuse



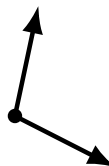
acute



acute



acute



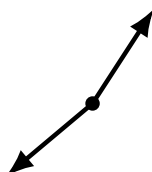
obtuse



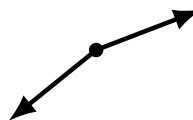
acute



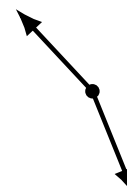
obtuse



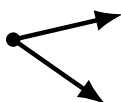
obtuse



obtuse



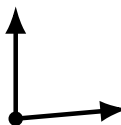
obtuse



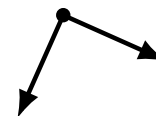
acute



acute



acute



right