

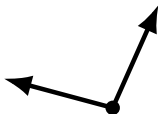

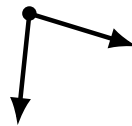
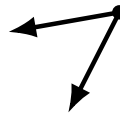
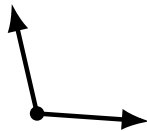

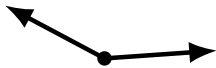
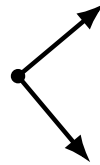
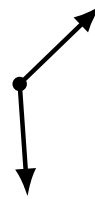
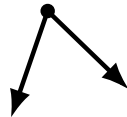
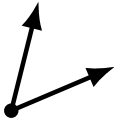
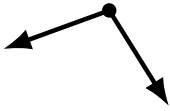
Identifying Angle Types (H)

Name: _____

Date: _____

Score: _____

Identify each angle as acute, obtuse or right.



Identifying Angle Types (H) Answers

Name: _____

Date: _____

Score: _____

Identify each angle as acute, obtuse or right.



obtuse



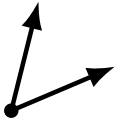
acute



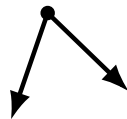
acute



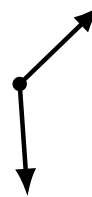
obtuse



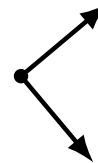
acute



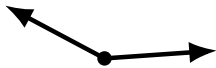
acute



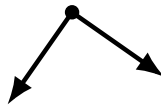
obtuse



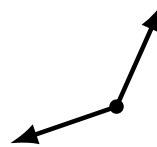
right



obtuse




right



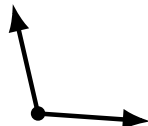
obtuse




acute



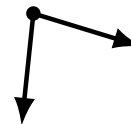
acute



obtuse



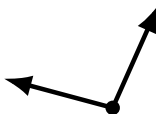
acute



acute



obtuse



obtuse



acute



obtuse