

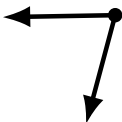
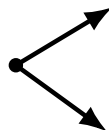
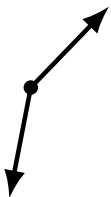
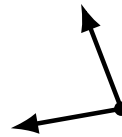
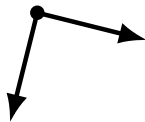
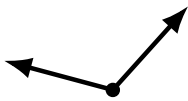
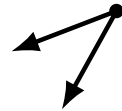
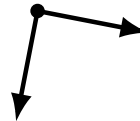
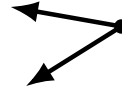
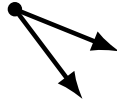
Identifying Angle Types (G)

Name: _____

Date: _____

Score: _____

Identify each angle as acute, obtuse or right.



Identifying Angle Types (G) Answers

Name: _____

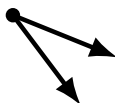
Date: _____

Score: _____

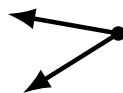
Identify each angle as acute, obtuse or right.



acute



acute



acute



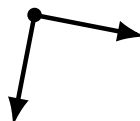
obtuse



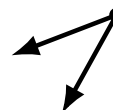
obtuse



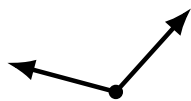
obtuse



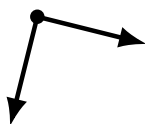
right



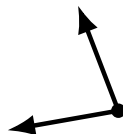
acute



obtuse



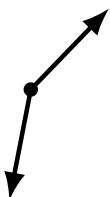
right



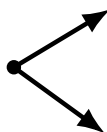
acute



obtuse



obtuse



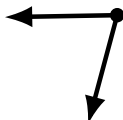
acute



acute



acute



acute



obtuse



obtuse



obtuse