

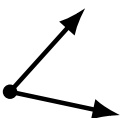
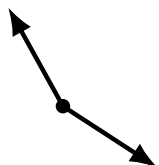
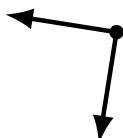
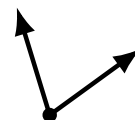
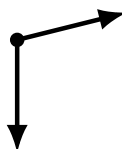
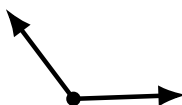
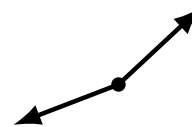
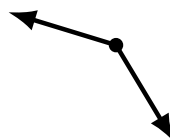
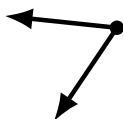
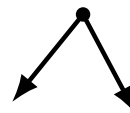
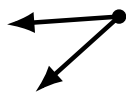
# Identifying Angle Types (F)

Name: \_\_\_\_\_

Date: \_\_\_\_\_

Score: \_\_\_\_\_

Identify each angle as acute, obtuse or right.



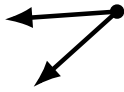
# Identifying Angle Types (F) Answers

Name: \_\_\_\_\_

Date: \_\_\_\_\_

Score: \_\_\_\_\_

Identify each angle as acute, obtuse or right.



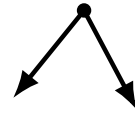
acute



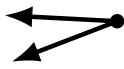
obtuse



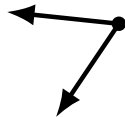
obtuse



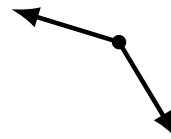
acute



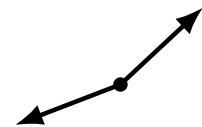
acute



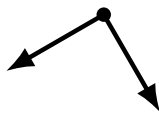
acute



obtuse



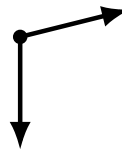
obtuse



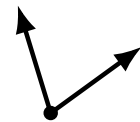
right



obtuse



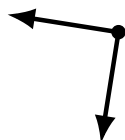
obtuse



acute




acute



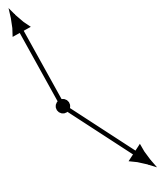
right



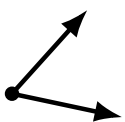
obtuse



acute



obtuse



acute



obtuse



acute